



Municipal School Board, Ahmedabad

Second Term Examination - 2018-19

Std.-6

Sub.-English

Total Marks - 80

Date : 26-03-20

Time : 2-00 to 5-00

Roll No. :- _____

Q. 1 (A) Answer the following questions, based on your village / city :- (5)

- (1) What is the name of your city ?
- (2) In which district is your city ?
- (3) Which festivals are most celebrated in your city ?
- (4) Which place do you like the most in your city ?
- (5) Why do you like your city ?

(B) Complete the dialogue using the words / sentences given in bracket :- (6)

(In English - II paper, Why are you late today, I scored 60% sir, I have an injury in my leg. We were held up in traffic jam, yesterday also you came late to English class)

Teacher :- Riyansh, _____ ?

Riyansh : I came on foot. _____

Teacher :- _____

Riyansh :- I came with my father on bike. _____

Teacher : How many marks did you score in English - I paper ?

Riyansh :- _____

Teacher :- _____

Riyansh :- I scored 48% only

Teacher :- Then you are careless in learning grammer.

(C) Read below given paragraph and answer the following questions :-

(5)

“David, Father and I are leaving one job for you to do this morning.” Mother said. Father said, “That’s right. Before you do anything else, fill the water tank.” “But I wanted go to the pasture to help Pete with the animals,” David complained.

“No,” said Mother firmly, “Bring up the water first or it may not get done.”

Father added, “Boy, you’ll be in hot water if you don’t get your work done.” and with that they drove away.

David walked back into the house. David, his father, mother and Pete had just built this house. It was David’s job to fill the large water barrel.

The water was so low in the barrel that David couldn’t even touch the surface with his finger tips.

He sighed. He was a strong boy and he wasn’t a bit tired, but it made him sigh to think of all the other things he’d prefer to do that cool, beautiful morning.

Questions :-

- (1) Which characters have been mentioned in the story so far ?
- (2) Which characters have spoken in the story ?
- (3) Who do you think Pete is ?
- (4) What do you think Pete might be doing ?
- (5) David has many things he’d prefer do on a nice day besides carry water. What are your favourite things to do on a nice day when you are free ?

Q. 2 (A) Write the stanza on the basis of following sentences :-

(3)

- (1) The sailors are surrounded by water but they are unable to drink one drop of water.
- (2) The picture is complete only when all the colours are together. Though different / unique the beauty of things lies in togetherness
- (3) Never waste anything. Use only what is required.

(B) Answer the following in two-three sentences :-

(8)

- (1) What efforts did David and Pete together make to put out the fire ?
- (2) Name four trees that belong to the family of tall trees.
- (3) What is the message of the story ‘The crow and the pitcher’?
- (4) What are the walls of Aman Setu Primary School made of ?

(C) Choose the correct option and write answer :-

(5)

(1) What did Buddha do when the disciple, ask him to get a new robe ?

(A) He immediately gave him a new robe.

(B) He refused to give him a new robe.

(C) He made sure that the old robe could not be used any longer.

(2) The uniforms of the students of Aman Setu Primary School are coloured with _____ .

(A)Vegetable Dyes (B) Cow Dung (C) Soil

(3) The rat - temple near Bikaner is known as _____ temple.

(A) Karni Mata (B) Charan (C) Yama

(4) Who named the tree 'Sequoia' ?

(A) John Mayo (B) John Muir (C) John Mayor

(5) The word 'Pyro' means _____ in Greek.

(A) Water (B) Fire (C) Air

Q.3 (A) Read the following paragraph and answer the given questions :-

(5)

Anu is a young woman who absolutely adores dogs. She owns a papillion named Louie, a chihuahua named Isabella and a Siberian husky named Koda. Every weekend she takes her dogs to the dog park where they love to run, play catch and meet other dogs.

When Anu took her pets to the park last Saturday, she almost lost poor little Louie. She was playing catch with Koda when she lost sight of Louie. In a panic, she started shouting his name and asked other dog owners if they saw her little Papillion. After 30 minutes of searching and with the help of one dog owner, she finally found him at the entrance of the dog park near a small store that sells Louie's favourite treats. Anu was delighted when she found Louie and bought all three of her dogs their favourite treats.

(1) Who is the woman in the story ?

(2) What three activities do the dogs love to do ?

(3) When does this story take place ?

(4) Where does this story take place ?

(5) Why is Anu in a panic ?

(B) Answer in two-three sentences :- (6)

- (1) Write two advantages of 'Reducing.'
- (2) What different materials can we use to prepare 'Rangolis' ?
- (3) Write meaning of the idiom 'music to your ears.'

(C) Choose the correct option and write answer (5)

- (1) Vincent Van Gogh was a / an _____ .
(A) Environmentalist (B) Artist (C) Photographer
- (2) In the story 'The Water Barrel - Part 3', Where was the smoke coming-from ?
(A) Ground Floor (B) Cellar Window (C) Outside the house.
- (3) The instrument 'Hydraulophone' uses _____ to produce music.
(A) Water (B) Soil (C) Air
- (4) Desalination is the process of _____
(A) Purifying impure water.
(B) Removing salt from sea-water.
(C) Adding salt to pure water.
- (5) David and his parents were proud of their house because _____
(A) It was near the river.
(B) They had built it by themselves.
(C) It was big and comfortable.

4 (A) Write an essay of about 100 words on 'any one' topic. (6)

- (1) The Importance of water
- (2) Modern Inventions
- (3) Photography

(B) Answer the following questions given on the basis of timetable shown below :- (4)

Days	1	2	3	4	5	6	7	8
Monday	Eng.	Eng.	Science	Science	Maths	Maths	Drawing	Drawing
Tuesday	Hindi	Hindi	Maths	Maths	Guj	Guj	Computer	P.E.
Wednesday	Guj	Guj	S.S.	S.S.	Sci	Sci	Eng.	Eng(W)
Thursday	Maths	Maths	Eng.	Hindi	Hindi	Hindi	G.K.	Music
Friday	Sci	Sci	Hindi	Hindi	Sanskrit	Work Exp.	Sanskrit	P.E.
Saturday	M.D.	S.S.	PAT	PAT	Guj(W)			

- (1) On which day period of Music is there ?
- (2) How many periods of English subject are there in a week ?
- (3) Which subjects are once in a week ?
- (4) According to this timetable, In which period / subject you enjoy the most ?

(C) Write your own story on the basis of the clues given below :- (6)

A poor farmer - gets a wonderful hen - lays a golden egg everyday - farmer becomes rich - greedy to become richer - cuts the hen - finds no golden egg - repents his mistake - cries.

Q. 5 Do as directed (16)

(1) Underline the verb and make a new sentence using the same verb :- (4)

- (1) He received many gifts yesterday.
- (2) Kruti plays at the park everyday.

(2) Underline the noun in the sentences given below (2)

- (1) The moons shines brightly at night.
- (2) The player started laughing.

(3) Identify the adjective, adverb and punctuations used in the sentences. (6)

- (1) Nidhi always speaks politely with her younger bother.
- (2) Will you gently lift the basket of red roses for me ?

(4) Identify the idioms in the sentences. (4)

- (1) This is one of my favourite pieces of furniture which I got for a song from the market.
- (2) Your words are music to my ears and so, I enjoy listening to you.



Municipal School Board, Ahmedabad

Second Term Examination - 2020

Std.-6

Date : 28-03-20

Sub.-Social Science

Total Marks - 80

Time : 2-00 to 5-00

Roll No. :- _____

SECTION - A

• Choose the correct alternative from those given below each question. [16]

- (1) Which is the oldest Veda ?
(A) Rigveda (B) Yajurveda (C) Atharveda (D) Samveda
- (2) What were the animals domesticated by Vedic people ?
(A) Sheep – Goat (B) Horse – Cow (C) Dog – Cat (D) Buffalo – Goat
- (3) Which Sarover is found in the Vadodara district from the following ?
(A) Sardar Sarovar (B) Nal Sarovar
(C) Ajwa Sarovar (D) Narayan Sarovar
- (4) Which is the biggest river of Gujarat ?
(A) Sabarmati (B) Tapi (C) Mahi (D) Narmada
- (5) How many Mahajanpadas were there in the 6th and 7th century B.C. ?
(A) 8 (B) 4 (C) 12 (D) 16
- (6) What is the tenure of all three Local self Government Institutions of Panchayatiraj ?
(A) 3 (B) 2 (C) 5 (D) 4
- (7) Who is the administrative head of Jilla Panchayat ?
(A) Taluka Development Officer (B) District Development Officer
(C) Chief Officer (D) Municipal Commissioner
- (8) Which is the main port of Gujarat ?
(A) Kandala (B) Veraval (C) Porbandar (D) Surat

- (9) By which name is the head of the Municipality known ?
 (A) Chief officer (B) Mayor (C) Nagar Sevak (D) President
- (10) What was Siddharth's wife name ?
 (A) Yashoda (B) Savitri (C) Yashodhara (D) Radha
- (11) What was the childhood name of Mahavir Swami ?
 (A) Rahul (B) Harshvardhan (C) Mahendra (D) Vardhaman
- (12) Which is the famous dance of Gujarat ?
 (A) Ghoomar (B) Garba (C) Bihu (D) Bhangra
- (13) Which is the smallest continent ?
 (A) Asia (B) Europe (C) Australia (D) Antarctica
- (14) Who started the Vikram Samvat ?
 (A) Chandragupta – II (B) Chandragupta – I
 (C) Gautam Buddha (D) Emperor Ashoka
- (15) Who was the greatest mathematician of Gupta age ?
 (A) Varahmihir (B) Brahmgupta
 (C) Bhaskeracharya (D) Aryabhata
- (16) Which continent is known as Penguin land ?
 (A) Europe (B) Asia (C) Antarctica (D) Australia

SECTION - B

● Fill in the following blanks.

[5]

- (17) By the preaching of Buddhist saint _____, king Ashoka renounced weapons.
- (18) Mahavir Swami is the _____ Tirthankar of Jainism.
- (19) One should go to an open ground in case of _____.
- (20) Emperor Samudragupta had performed _____ yagna.
- (21) Tree stops erosion of _____.

- **Identify Me.** [5]
 - (22) Ornaments are made from me.
 - (23) I am the head of Grampachayat.
 - (24) I am a queen of Lichchhavi dynasty.
 - (25) I am the main cotton textile centre of Gujarat.
 - (26) I am famous for Lion in whole Asia.

- **Match the following.** [5]

‘A’	‘B’
(27) Kalidas	(A) Kanam Province
(28) Migrating bird	(B) Asia
(29) Cotton	(C) Famous poet
(30) Biggest continent	(D) Cement Industry
(31) Lime stone	(E) Nal Sarovar
	(F) Europe

- **State whether the following statements are true or false.** [5]

- (32) Khakhra leaves are used to make bowls and plates of leaves.
- (33) Gram Sabha meets in Taluka Panchayat.
- (34) In Gujarat Kheda district is a leading producer of rice.
- (35) Disconnect the power supply at time of flood.
- (36) There are four types of transportation.

- **Classify.** [4]

- (37) **Classify the following natural resources in the rivers and lakes.**

Sursagar, Tapi, Nal, Ajawa, Narmada, Bhadar, Banas, Narayan

SECTION - C

- **Answer the following questions in one-two sentences.** [4]

- (38) King Ashoka wanted to conquer which state ?
- (39) To whom we should contact at the time of fire ?
- (40) Write the names of sources of water.
- (41) Which crops are cultivated in Gujarat ?

- **Answer the following questions in three-four sentences. (Any three)** [9]
 - (42) What was inscribed on the stones by Ashoka ?
 - (43) Which festival do you like ? Why ?
 - (44) What was the preaching given by Gautam Buddha ?
 - (45) Write the importance of forests.

- **Define the following terms. (Any three)** [6]
 - (46) Inscription
 - (47) Sanctuary
 - (48) Check dam
 - (49) Transportation

SECTION - D

- **Give the reason. (Any three)** [9]
 - (50) 'Rights' and 'Duties' are the two sides of the same coin.
 - (51) Suddharth left his wife Yashodhara and son Rahul.
 - (52) Emperor Ashoka decided not to fight any battle in Future.
 - (53) There is a less population in Antarctica Continent.

- **Write short note. (Any two)** [8]
 - (54) Natural and Man-made calamities
 - (55) Our rights
 - (56) Conservation of water resources

SECTION - E

- **Show the following details with proper signs at proper places in the given lined map of Gujarat.** [4]
 - (57) Gulf of Kutch
 - (58) Narayan Sarovar
 - (59) Tropic of cancer
 - (60) Ahmedabad



Municipal School Board, Ahmedabad

Second Term Examination - 2020

Std.-6

Sub.-Maths

Total Marks - 80

Date : 27-03-20

Time : 2-00 to 5-00

Roll No. :- _____

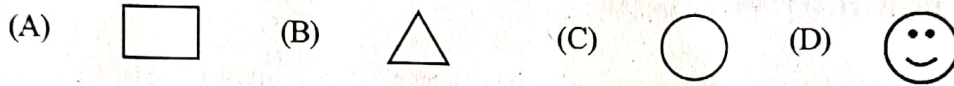
SECTION - A

Do As Directed. (Q. No. – 1 to 28) (Each carry 1 Mark)

(28)

Find the correct option from given below : (Q. N. – 1 to 8)

(1) In which figure do you find numerous lines of symmetry.



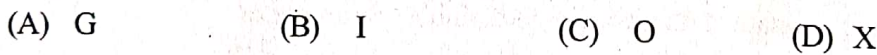
(2) In which diagram do the lines represent the symmetry ?



(3) Which alphabetical pair shows vertical line of symmetry ?




(4) Which alphabet reflects charge when viewed in the Mirror ?



(5) The measures of angle is in between _____.



(6) Which of the following figure has the largest perimeter ?



(7) What is the another name of bar graph ?



(8) Write in decimal forms - seven ones and seven tenths.

(A) 7.007

(B) 7.7

(C) 7.710

(D) 7.07

• **Fill in the blanks : (Q. No. 9 to 13)**

(9) Before 5 years farhan's age is Y, the current age is _____ years.

(10) The variable in equation $8m + 20 = 60$ is _____.

(11) The value of variable in $N - 5 = 5$ is _____.

(12) There are 45 Matchsticks in one Matchbox. Such 'n' boxes contains _____ Matchsticks.

(13) A farmer builds a fence around his farm. The length of this fence is called its _____.

• **Answer in short. (Q. No. 14 to 23)**

(14) What is the length of lace required to be placed around a square table of 40 cm length ?

(15) Find the area of a square plot of side 8 m.

(16) Write how $(b - 7)$ have been formed ?

(17) Express in decimals 2 m and 80 cm.

(18) Express 5 paise using decimals as rupees.

(19) Express 9 cm 8 mm using decimals in cm.

(20) The area of a square cloth is 64 cm^2 , then find its perimeter.

(21) Express 26 kg, 50 g, using decimals in kg.

(22) Express 35 m 20 cm using decimals in Meters.

(23) How much does one tenth and one-hundredth of a sum be ?

• **Write whether the statement is true or false. (Q. No. 24 to 28)**

(24) $3x + 2 = 1$ is an equation.

(25) We can get equivalent ratios by multiplying the numerator by the denominator and denominator by the numerator.

- (26) 30 : 20 and 24 : 16 is an equivalent ratio.
- (27) If two ratios are not equal, then we say that they are not in proportion.
- (28) If the cost of 6 cans of juice is ₹ 210, then the cost of 4 cans of juice is ₹ 140.

SECTION - B

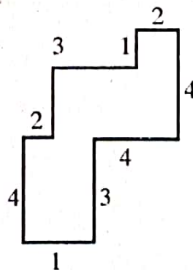
- Solve the following as per instruction. (Q. No. 29 to 39, Each carry 2 Marks.) (22)

- (29) Find out the smaller and greater number from 0.33, 0.03, 3.3 and 3.50.
- (30) Subtract : $15 - 10.632$
- (31) In Mathematics test, the following marks were obtained by 30 students. Arrange these marks in a table using tally marks.
- | | | | | | | | | | |
|---|---|---|---|---|---|---|---|---|---|
| 2 | 5 | 3 | 4 | 6 | 1 | 5 | 5 | 6 | 1 |
| 1 | 2 | 2 | 3 | 5 | 2 | 4 | 5 | 5 | 6 |
| 5 | 1 | 6 | 2 | 3 | 5 | 2 | 4 | 1 | 5 |

- (32) On the basis of Q.31 answer the following.
- (A) How many students obtained marks equal to or more than 4.
- (B) How many students obtained marks below 2 ?
- (33) What is the total length of rope to be used to wrap a rope three times around a 75 Meter side square field ?

OR

- (33) Find the area of a piece of wood whose length and width are 12 cm and 4 cm respectively.
- (34) By splitting the following figures into rectangles find their areas. (The Measures are given in centimeters)



- (35) Complete the table and by inspection of the table find the solution to the equation $5t = 35$

t	3	4	5	6	7	8	9	10	11
5t	—	—	—	—	—	—	—	—	—

- (36) Form expressions using a, 2 and 7. Every expression must have a in it. Use only two number operations. These should be different.
- (37) Determine $25 \text{ cm} : 1 \text{ m}$ and $\text{₹ } 40 : \text{₹ } 160$ form a proportion. Also write the middle terms and extreme terms where the ratios form a proportion.
- (38) Give two equivalent ratios of $10 : 3$.
- (39) Cost of 105 envelopes is ₹ 35. How many envelopes can be purchased for ₹ 10?

SECTION - C

● Solve the following : (Q. No. 40 to 45) (Each carry 3 Marks)

(18)

- (40) Ravi purchased 5 kg 400 g rice, 2 kg 20 g sugar and 10 kg 850 g flour. Find the total weight of his purchases.

OR

- (40) Iqbal bought 3 m 20 cm cloth for his shirt and 2 m 5 cm cloth for his trouser. Find the total length of cloth bought by him.

- (41) Total number of animals in five villages are as follows :

Village A : 80 Village B : 125 Village C : 90 Village D : 40 Village E : 65

Prepare a pictograph of these animals using one symbol \otimes to represent 10 animals.

- (42) A room is 4 m long and 3 m 50 cm wide. How many square metres of carpet is needed to cover the floor of the room ?

- (43) Which of the following equation has the solution 12 ?

(1) $n + 55 = 60$ (2) $5m = 60$ (3) $100 - 3p = 70$

- (44) Take vijay's present age to be h years.

(1) What will be his age after 6 years ?

(2) What was his age 4 years back ?

(3) Vijay's grandfather is 6 times his age. What is the age of his grandfather ?

- (45) Given \overline{AB} of length 7.3 cm and \overline{CD} of length 3.4 cm, construct a line segment \overline{XY} such that the length of \overline{XY} is equal to the difference between the lengths of \overline{AB} and \overline{CD} . Verify by measurement.

SECTION - D

● Solve as per instructions : (Q. No. 46 to 48) (Each carry 4 marks)

(12)

- (46) The following is information about customers who have been in the shop for six consecutive days is show below.

Days	Sunday	Monday	Tuesday	Wednesday	Thursday	Friday.
Number of Customers	65	40	30	50	20	70

Draw a bar graph to represent the above information choosing the scale of your choice on graph paper

OR

The details of books in a library are given below. (Take 1 unit length = 5 books). Draw a bar graph to represent below data.

Type of Books	Number of Books
Story Picture	45
Mythology stories	30
Teenager stories	20
Poetry collection	10
English stories	25

- (47) Draw a line segment of length 9.6 cm and construct its Perpendicular bisector.
- (48) Draw a circle of radius 3.4 cm. Draw any one of its chords.



નગર પ્રાથમિક શિક્ષણ સમિતિ, અમદાવાદ
દ્વિતીય સત્રાંત પરીક્ષા - 2020

તારીખ :- ૧-૪-૨૦
સમય :- ૧૨-૦૦ થી ૨-૦૦

ધોરણ-6
વિષય - પ્રાદેશિક ભાષા

કુલ ગુણ - 80

વિદ્યાર્થીનું નામ :- _____

રજિ. નંબર :- _____

શાળાનું નામ :- _____

વર્ગ :- _____

પ્રશ્ન ક્રમાંક	1	2	3	4	5	કુલ ગુણ
પ્રશ્નના ગુણ	16	16	16	16	16	80
મેળવેલ ગુણ						

નિરીક્ષકની સહી :- _____

પરીક્ષકની સહી :- _____

પ્રશ્ન : 1 (ક) નીચેનાં શબ્દોના વિરુદ્ધાર્થી શબ્દો લખો.

(4)

(1) અંદર X _____ (2) દૂર X _____

(3) મૂર્ખ X _____ (4) આવવું X _____

(ખ) નીચે આપેલા શબ્દોના સમાનાર્થી શબ્દો લખો.

(4)

(1) આંખ - _____ (2) જંગલ - _____

(3) પ્રતિમા - _____ (4) અજવાળ - _____

(ગ) નીચેના શબ્દોને શબ્દકોશના ક્રમમાં લખો.

(4)

રહેમ, ઊંટ, ઝવેરાત, પાંદડું

(ઘ) જોડણી સુધારો.

(4)

(1) જ્ઞાસા - _____ (2) બંદુક - _____

(3) ડોલરીઓ - _____ (4) સેનિક - _____

પ્રશ્ન : 2 (ક) નીચેના શબ્દસમૂહો માટે એક શબ્દ લખો.

(4)

(1) ઘોડા ઉપર સવારી કરનાર - _____

(2) ઘાસ વગેરે એકઠાં કરી બાંધેલો જથ્થો - _____

ધો. દ-(ઈ.મા.)

પ્રાદેશિક ભાષા

(૧)

કુલપેજ-૫

(ખ) નીચેનાં વાક્યો કોણ બોલે છે તે લખો.

(1) “ભાઈ, મને બેઠો કરો, ભગવાન તમારું ભલું કરશે.”

(2) “પણ ઘોડા પર મૂકતાં શું થતું હતું.”

(3) “તેની જમણી આંખ ફૂટેલી છે?”

(4) “આ ફકીરને પકડીને રાજા પાસે લઈ જાઓ”

(4)

(ગ) નીચેનાં વિધાનોમાંથી ખરાં વિધાન સામે (✓) ની નિશાની અને ખોટાં વિધાન સામે (X) ની નિશાની કરો.

(4)

(1) કમનસીબે ગોળી નિશાન ચૂકી ગઈ.

(2) ચાંચમાં પાણી લાવીને છોડને પાવું.

(3) બંદૂકનો અવાજ સાંભળી સિંહ ભાગી ગયો.

(4) સયાજીરાવ અમદાવાદના રાજા હતા.

(ઘ) નીચેનો ફકરો વાંચી પ્રશ્નોના જવાબ લખો.

(4)

રાજાનો હુકમ સાંભળી ફકીર બોલ્યા, “રાજાજી, રહેમ કરીને પહેલાં મારી વાત સાંભળો. ખરેખર, મેં ઊંટ જોયું નથી. વાત એમ છે કે, હું વનવગડામાં કેટલાય વરસથી રહું છું. મને બધું અવલોકન કરીને જોવાની ટેવ છે. આજે સવારે જ્યારે હું વનવગડામાં જતો હતો, ત્યારે મેં જમીન ઉપર ઊંટનાં પગલાં જોયાં, પરંતુ તેની સાથે માણસનાં પગલાં ન હતાં, તે ઉપરથી મેં માન્યું કે, તે ઊંટ તેના માલિક પાસેથી જુદું પડી ગયેલું હોવું જોઈએ.”

(1) ઊંટનાં પગલાં જોઈ ફકીરે શું અવલોકન કર્યું?

(2) ફકરે રાજાજીને પોતાના વિશે શું વાત કહી?

પ્રશ્ન : 3 (ક) નીચેની કાવ્યપંક્તિઓ પૂર્ણ કરો.

(8)

ચાલ બચુડા, _____

_____, અફસર સા'બને નમીએ,

(ખ) નીચેના વાક્યોનો તમારી માતૃભાષામાં અનુવાદ કરો.

(8)

(1) છોડને મોટો થવાની ઈચ્છા હતી.

(2) આજે આપણે ઘેર ઠાકુર પધારવાના છે.

(3) ફકીર વનવગડામાંથી પસાર થતા હતા.

(4) પ્રાણીના શિકારની કાયદાથી મનાઈ છે.

પ્રશ્ન : 4 (ક) નીચેના પ્રશ્નોના જવાબ ટૂંકમાં લખો. (ગમે તે ચાર)

(8)

(1) કમાટીબાગ બીજા કયા નામે ઓળખાય છે ?

(2) આપણો ઝંડો ક્યારે ઊંચો રહેશે ?

(3) છોડ પર દયા આવતાં પંખીએ શું કર્યું ?

(4) બાળ નરેન્દ્રની માતાનું નામ શું હતું ?

(5) વેપારી ગુસ્સે શા માટે થયો ?

(ખ) કોઈ પણ એક વિષય પર આઠ વાક્યો લખો.

(1) સ્વચ્છતાનું મહત્વ (2) મારી શાળા (3) વર્ષાઋતુ

(8)

પ્રશ્ન : 5 (ક) નીચેના પ્રશ્નોના જવાબ બે-ત્રણ વાક્યોમાં લખો. (ગમે તે બે)

(1) ઊંટ એક આંખે કાણું હશે એવું અનુમાન ફકીરે કયા આધારે કર્યું?

(2) તારકને શેની બીક લાગે છે?

(3) છોડ શાથી સાવ બોડો થઈ ગયો?

(4) પંખીની તરસ છિપાવવા, પંખી ટોળાએ શું કર્યું?

(ખ) નીચેનાં કારણો લખો. (ગમે તે બે)

(1) છોડ તો સાવ બોડો થઈ ગયો કારણ કે.....

(2) રાજાએ ફકીરને સખત શિક્ષા કરવાનો હુકમ કર્યો કારણ કે.....

(3) રાજાએ હરિ અને અરજણની સયાજીબાગના મુખ્ય દરવાજા પાસે પ્રતિમાઓ બનાવડાવી કારણ કે.....



नगर प्राथमिक शिक्षण समिति, अमदावाढ

द्वितीय सत्रांत परीक्षा : 2020

धोरण-6

विषय - हिन्दी (निम्नस्तर)

कुल गुण - 80

तारीख :- 30-3-20
समय :- 2-00 थी 4-00

रजि. नं० :- _____

प्रश्न:1 (अ) सही विकल्प चुनकर प्रश्न का उत्तर लिखिए। 8

1. आप चाय पसंद करेंगे _____ कॉफी?
(A) लेकिन (B) फिर भी
(C) या (D) ताकि
2. किताबें ज्ञान का स्रोत है। रेखांकित शब्द का वचन परिवर्तन कीजिए।
(A) किताबों (B) किताब
(C) किताबी (D) किताबें
3. भिन्न शब्द पहचानिए।
(A) पोस्टकार्ड (B) अंतर्देशीय पत्र
(C) लिफाफा (D) कम्प्यूटर
4. गलत जोड़ पहचानिए।
(A) सौदागर - वेपारी (B) पंसारी - गांधी
(C) तमोली - तंबोली (D) खरादी - धडियाली
5. 'एक के बाद एक विपत्ति में फँसना' अर्थवाली कहावत ढूँढिए।
(A) जो गरजते हैं सो बरसते नहीं (B) आसमान से गिरा खजूर में अटका
(C) नाम बड़े दर्शन छोटे (D) एक तो करेला ऊपर से नीम चढ़ा
6. संयुक्ताक्षर वाला शब्द ढूँढिए।
(A) युद्ध (B) परेशानी
(C) बहुत (D) बबूल
7. 'यह भी एक परीक्षा' इकाई का साहित्य प्रकार कौन-सा है ?
(A) प्रसंगवर्णन (B) पत्र
(C) एकांकी (D) कहानी
8. 'अपील' शब्द का अर्थ पहचानिए।
(A) सच्चाई (B) निवेदन
(C) दलील (D) खोज

(ब) परिच्छेद को पढ़कर प्रश्नों के उत्तर लिखिए।

4

दूरदर्शन मनुष्य जाति के लिए वरदान है। मनोरंजन के क्षेत्र में इसने क्रांति पैदा कर दी है। इस पर दिखाए जानेवाले कार्यक्रमों में देश-विदेश की घटनाओं का सीधा प्रसारण किया जाता है। जल, थल, नभ की गहराइयों के रहस्यों को उजागर किया जाता है। विज्ञान तथा इतिहास की जानकारी प्रदान की जाती है। दूरदर्शन पर दिखाए जानेवाले अनेक कार्यक्रम जन जागरण करने में भी सक्षम है। दूरदर्शन का प्रभाव इतना व्यापक होता है कि अनेक सामाजिक बुराइयों के प्रति जनक्रोध जागृत करने में यह महत्वपूर्ण भूमिका निभाता है।

प्रश्न :

1. परिच्छेद में से विलोम शब्द की जोड़ ढूँढिए।
2. दूरदर्शन ने किस क्षेत्र में क्रांति पैदा की है?
3. 'आसमान' शब्द का समानार्थी शब्द ढूँढिए।
4. इस परिच्छेद को उचित शीर्षक दीजिए।

(क) सूचना अनुसार लिखिए।

1. कहावत का अर्थ देकर समझाइए।
कंगाली में आटा गिला 2
2. लिंग परिवर्तन करके उसका वाक्य प्रयोग कीजिए।
बाघ 2

प्रश्न:2 (अ) प्रश्नों के उत्तर संक्षेप में लिखिए। (किन्हीं पाँच)

10

1. आपको नेपोलियन का पत्र कैसा लगा? क्यों?
2. भिखारी के कटोरे में क्या-क्या था?
3. आपने किसी को पत्र लिखा है? क्यों?
4. अली ख्वाजा ने मोहरें तेल में क्यों छिपाई होगी?
5. देवेन्द्र ने परीक्षा होने के बावजूद भी भिखारी की मदद क्यों की?
6. सोनू डॉक्टर के पास क्यों गया?

(ब) प्रश्नों के उत्तर लिखिए। (किन्हीं दो)

6

1. वाजिद और हसन की जगह आप होते तो क्या करते?
2. पत्र लेखन के प्रारूप में आनेवाले मुद्दों को क्रमशः लिखिए।
3. नेपोलियन और उसकी बहन के स्वभाव में क्या अंतर था?

प्रश्न :3(अ) प्रश्नों के उत्तर संक्षेप में लिखिए। (किन्हीं तीन)

6

1. हम जगत में क्या अर्पण करना चाहते हैं?
2. कम्प्यूटर और इन्टरनेट से हमें क्या लाभ हुए हैं?
3. 'मन का विश्वास कमजोर हो ना' ऐसा कवि क्यों कहते हैं?
4. संदेशाव्यवहार किन-किन उपकरणों के माध्यम से हो सकता है?

(ब) प्रश्नों के उत्तर लिखिए। (किन्हीं दो)

6

1. यदि हम समय और शक्ति का सही उपयोग नहीं करते तो ...
2. हम सभी को क्या बाँटना चाहते हैं ? क्यों ?
3. तुम्हें विज्ञान का कौन-सा आविष्कार सबसे अच्छा लगता है ? क्यों ?

(क) काव्य पंक्तियाँ पूर्ण कीजिए।

2

हम न सोचे.....
.....
.....
..... बन जाए मधुबन।

(ड) विशेषण शब्दों का उपयोग करके वाक्य बनाइए।

2

- (1) थोड़ा (2) तीसरा

प्रश्न:4(अ) निम्नलिखित वाक्य कौन किसे कहता है? लिखिए।

2

1. "अंधा है क्या ! देखकर नहीं चलता। मेरे कप टूट गए।"
2. "चलो बाबा तुम्हें अस्पताल तक पहुँचा दूँ।"

(ब) शुद्ध वाक्य में लिखिए।

4

1. मैंने अहमदाबाद से अम्बाजी की टिकट ली।
2. रावण के साथ युद्ध में राम का विजय हुआ।
3. मैंने पुस्तक खरीदा।
4. आज भारी बरसात हुआ।

(क) सूचना अनुसार कीजिए।

1. समान प्रासवाले दो-दो शब्द लिखिए।

2

नौकरानी,,,
आर्थिक,,

2. मुहावरे का अर्थ देकर वाक्य में प्रयोग कीजिए।

2

सिर पकड़कर बैठ जाना

(ड) कहानी पूर्ण कीजिए।

6

एक बार राजा के महल में एक सेवक काँच का खूबसूरत मोर साफ कर रहा था। गलती से उसके हाथ से मोर गिरकर टूट गया। क्रोध में आकर राजा ने सेवक को छः महीने के लिए कारागार में डाल दिया। ...

प्रश्न:5 (अ)संयुक्ताक्षर से शब्द बनाकर शब्द का वाक्य में प्रयोग कीजिए।

2

त् + त = त्त

(ब) अपने मित्र को जन्मदिन की बधाई के संदर्भ में पत्र लिखिए।

अथवा

'नदी में बाढ़ आना' घटना का वर्णन करते हुए अपने मित्र को पत्र लिखिए।

(क) किसी एक विषय पर निबंध लिखिए।

1. विज्ञान के लाभा-लाभ
2. पुस्तक - हमारी मित्र
3. जीवन में प्रार्थना का महत्त्व



Municipal School Board, Ahmedabad

Second Term Examination - 2020

Std.-6

Date : 01-04-20

Sub.-Science and Technology

Total Marks - 80

Time : 8-30 to 11-30

Roll No. :- _____

Q.1 Choose the correct answer from the following questions.

[16]

(1) Identify the aquatic animal from the following.

(A) Turtle (B) Dolphine (C) Crocodile (D) Frog

(2) _____ and _____ are biotic components of their habitats.

(A) Plant and soil (B) Air and water
(C) Rock and animals (D) Plant and animals

(3) Choose the correct option according to its ascending order of length.

(A) 30 mm, 30 cm, 3 m, 3 km (B) 3 m, 3 km, 30 mm, 30 cm
(C) 30 cm, 3 m, 3 km, 30 mm (D) 3 km, 30 mm, 30 cm, 3 m

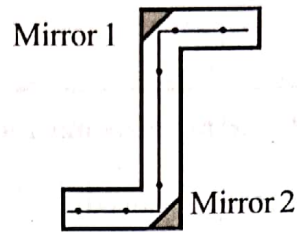
(4) Arrange the length of shadow in its descending order which is formed at 10 : 00 O'clock in the morning, 1 : 00 O'clock at afternoon and 4 : 00 O'clock in the evening.

(A) 1 : 00 O'clock at afternoon, 10 : 00 O'clock in the morning, 4 : 00 O'clock in the evening
(B) 4 : 00 O'clock in the evening, 1 : 00 O'clock at afternoon, 10 : 00 O'clock in the morning
(C) 4 : 00 O'clock in the evening, 10 : 00 O'clock in the morning, 1 : 00 O'clock at afternoon.
(D) 10 : 00 O'clock in the morning, 4 : 00 O'clock in the evening, 1 : 00 O'clock at afternoon.

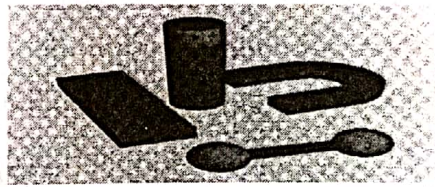
(5) What is required for the formation of shadow of an object ?

(A) Source of light, opaque object and screen, all three.
(B) Only source of light and screen.
(C) Source of light, transparent object and screen, all three.
(D) Only source of light and opaque object.

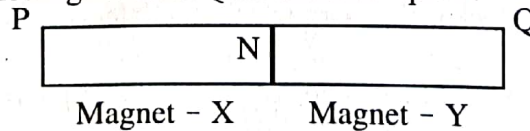
- (6) From the following, which event does not formed by the shadow ?
- (A) Event of solar eclipse (B) Event of lunar eclipse
- (C) Event of Rainbow formation (D) Both (A) and (B)
- (7) In the given diagram, device works on which principle ?



- (A) Absorption of light (B) Reflection of light
- (C) Motion of light in straight line (D) None of these.
- (8) Explain the condition of bulb of complete electric circuit in which electric current flow for a some time.
- (A) Cool and bulb will not glow (B) Warm and bulb will not glow
- (C) Warm and bulb will glow (D) Cool and bulb will glow
- (9) In the following diagram, how many pole does magnet have ?



- (A) One pole (B) Six pole (C) Four pole (D) Two pole
- (10) In the following diagram, single magnet is formed when Y magnet is attracted near N-Pole of X magnet. For the single magnet P and Q act as a which pole ?



- (A) P as a S – Pole and Q as a N – Pole
- (B) P as a N – Pole and Q as S – Pole
- (C) P as a S – Pole and Q as a S – Pole
- (D) P as a N – Pole and Q as a N – Pole

(11) From the following object, In which magnet is not used ?

- (A) DVD (B) LCD TV
(C) Computer Hard Disk (D) Tubelight

(12) Which circumstances arise if your village has more number of borewell ?

- (A) Underground water goes to lower depth (B) Underground water goes to more depth
(C) Increases the rain (D) Both (A) and (C)

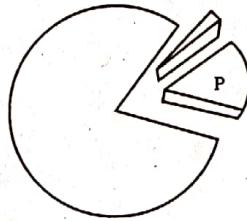
(13) As we go higher from the earth level air becomes _____.

- (A) Warm (B) Opaque (C) Thin (D) Dense

(14) When Nutan blow the air on her glass of specs to clean it, the vapour gets collected on her glass of specs, because _____.

- (A) Water present in the air gets evaporated
(B) Vapour present in the air gets condensed
(C) During blowing of air, water present in the mouth stick to the glass of specs.
(D) Both (A) and (B)

(15) In the following diagram of air constitution, 'P' portion indicates which gas ?



- (A) Nitrogen (B) Carbon dioxide, water vapour
(C) Oxygen (D) None of these

(16) Whose responsibility for the management of waste ?

- (A) Citizen (B) Government organization
(C) Public organization (D) All of them



Q.2

[A] Answer the following questions in one sentence.

[6]

- (17) Write the use of weather cock.
- (18) Write the function of gizzard.
- (19) Which magnet is used in compass ?
- (20) Give your opinion about conductivity for sea water.
- (21) What shape do you want to create that has a circular shadow when grasped one way and has a rectangular shadow if grasped the other way ?
- (22) Give an example of non-living object having any two characteristics, such as a living organism.

[B] Answer the following questions in three - four sentences. (Any Five)

[10]

- (23) Is the plant living or non-living ? Give the reason in support of your answer.
- (24) Why is speed so important for the animals living in the Grass lands ?
- (25) What will you do to identify piece of iron and piece of magnet ?
- (26) For which work do you use water at your home ?
- (27) What is a wind ? For which work wind can be used ?
- (28) What specific tips would you give to a cleaning worker for proper disposal of waste ?
- (29) Height of pole is 2.30 m, convert it into cm and mm.

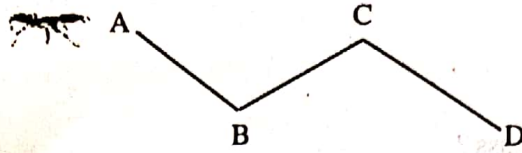
[A] Answer the following questions in five to seven sentences. (Any four)

[12]

- (30) What steps do you take to protect the magnet's magnetism ?
- (31) Give a detailed understanding of the interior design of the torch.
- (32) Following are the factors responsible for the occurrence of rainfall, adjust it in the correct order.

- Becoming cloud
- Condensation
- Increased endurance of condensed water droplets
- Shower rain
- Becoming watercress
- Evaporation

(33) How do you measure the distance of an ant travels from point A to D?



(34) How it can be determined that light travels in a straight line?

[B] Draw the diagram and label it.

[3]

(35) Rainwater harvesting from the roof.

Q.4 [A] Do as directed.

(36) Do the classification.

[6]

Motion of rocket, needle of sewing machine, motion of bull in oil mill, motion of bicycle wheels, the motion of the stone falling free from the height, the motion of swing.

Motion along a straight line	Circular motion	Rotational motion

(37) Match the following.

[4]

Section - A

Section - B

(1) Desert area

(A) Needle shaped leaf

(2) Mountainous area

(B) Grass

(3) Aquatic area

(C) Conversion of leaf into spine

(4) Land area

(D) Hollow stems

[B] Answer in detail. (Any two)

[8]

(38) How do you help your father to make a vermicompost fertilizer?

(39) Give a detailed understanding of how the atmosphere is purified.

(40) What will we do to collect rain water?



नगर प्राथमिक शिक्षण समिति, अमदावाद

द्वितीय सत्रांत परीक्षा : 2020

धोरण-6

विषय - संस्कृत

तारीख :- 3-8-20

समय :- ८-30 थी ११-30

कुल गुण - 80

रजि. नंबर :- _____

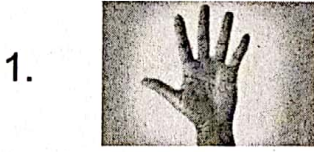
प्रश्न : 1 (अ) नीचे आपेलां वाक्योनुं सुंदर अक्षरे लेखन करो.

(5)

1. सर्वांगं हि पुरस्कुरु ।
2. अहं पुस्तकं पठामि।
3. मम ध्वजः त्रिवर्णः ।
4. कर्मनैष्ठिकं धर्मनैष्ठिकम् ।
5. धारा वीणासमीपं गच्छति ।

(ब) चित्रो ज्योर्धने संस्कृत शब्दो लभो.

(5)



प्रश्न 2 (अ) नीचेना विकल्पोमांथी योग्य विकल्प पसंद करी जावी जग्या पुरो.

(5)

1. मन्दं मन्दं.....।
A. स्वयम् B. कुरु C. भ्रामयतम् D. खेलामः
2. शंकरस्य त्रयम् अस्ति ।
A. कर्णः B. नेत्रम् C. हस्त D. चरणः

3. अहं पुस्तकालयेपठामि ।
 A. स्वाध्यायः B. गृहकार्यम् C. लेखनी D. पुस्तकम्
4. रीतिसंस्कृतं संस्कृतम्।
 A. नीति B. धर्म C. मुक्ति D. भक्ति
5. भारतमातुः दक्षिणे..... ।
 A. गङ्गा B. हिमालयः C. सागरः D. त्रिवर्णः

(ब) नीचे आपेव गद्यखंड वांगी आपेवा प्रश्नोना ज्वाब संस्कृतभां लप्नो.

(10)

धारा वीणासमीपं गच्छति । सा वदति, "महोदये, कृपया प्रार्थनासभाम् आगच्छतु ।" वीणा वदति, "आम्, अहम् आगच्छामि ।"

धारायाः सखी ममता आम्रपाली वृक्षस्य पर्णानि आनयति । सा तोरणं ग्रंथति । वैशाली प्रार्थनाखण्डे सुशोभनं करोति ।

1. धारा कस्याः समीपं गच्छति ?
2. "आम्, अहम् आगच्छामि ।" इति का वदति ?
3. धारायाः सखी का अस्ति ?
4. ममता किम् आनयति ?
5. वैशाली प्रार्थनाखण्डे किं करोति ?

प्रश्न 3 (अ) योग्य जोडकां जोडो.

(5)

<u>अ</u>	<u>ब</u>
1. नेत्रम्	1. पेट
2. दन्ताः	2. डाय
3. उदरम्	3. आंघ
4. करः	4. दंत
5. चरणः	5. पगनो पंजो

(બ) નીચેના શબ્દજૂથમાંથી અસંગત શબ્દ શોધો.

(4)

1. મુખમ્, ગ્રીવા, પાદરક્ષઃ, વક્ષઃ
2. રાકેશઃ, વિજયઃ, રમેશઃ, રમા
3. મયૂરઃ, કાકઃ, શ્વાનઃ, હંસઃ
4. ખાદતિ, નીશા, ગાયતિ, વદતિ

(ક) ઉદાહરણ પ્રમાણે શબ્દો બનાવો.

(6)

ઉદા. કર્ણઃ - કર્ણસ્ય

1. કણ્ઠઃ - _____
2. નેત્રમ્ - _____
3. વિદ્યાલયઃ - _____
4. મયૂરઃ - _____
5. કૃષ્ણઃ - _____
6. હંસઃ - _____

શ્ર 4 (અ) આપેલા શબ્દોનો સંસ્કૃતમાં અનુવાદ કરો.

(10)

1. હોઠ 2. દાંત 3. શાળા 4. વૃક્ષ 5. જમાણું 6. સ્મત
7. પુસ્તક 8. આભૂષણ 9. આસોપાલવ 10. મહેનત

(બ) આપેલાં વાક્યોનો સંસ્કૃતમાં અનુવાદ કરો

(10)

1. મારું નામ પૂનમ છે.
2. મારી શાળા સુંદર છે.
3. હું પત્ર લખું છું.

4. लुं छाया आपुं छुं.

5. बधा मणीने गाँअे.

प्रश्न 5 (अ) आपेवां वाक्योने पाठ्यपुस्तकना आधारे घटनाक्रम प्रमाणे गोठवो.

(10)

1. वीणा धारां आशीर्वादं ददाति ।
2. धारायाः जन्मदिनम् अस्ति ।
3. आचार्यः श्लोकं गायति ।
4. धारा अतीव आनन्दम् अनुभवति ।
5. सुजला धारां अभिनन्दनं ददाति ।

(ब) श्लोकपूर्ति करो. (कोईपणु बे)

(10)

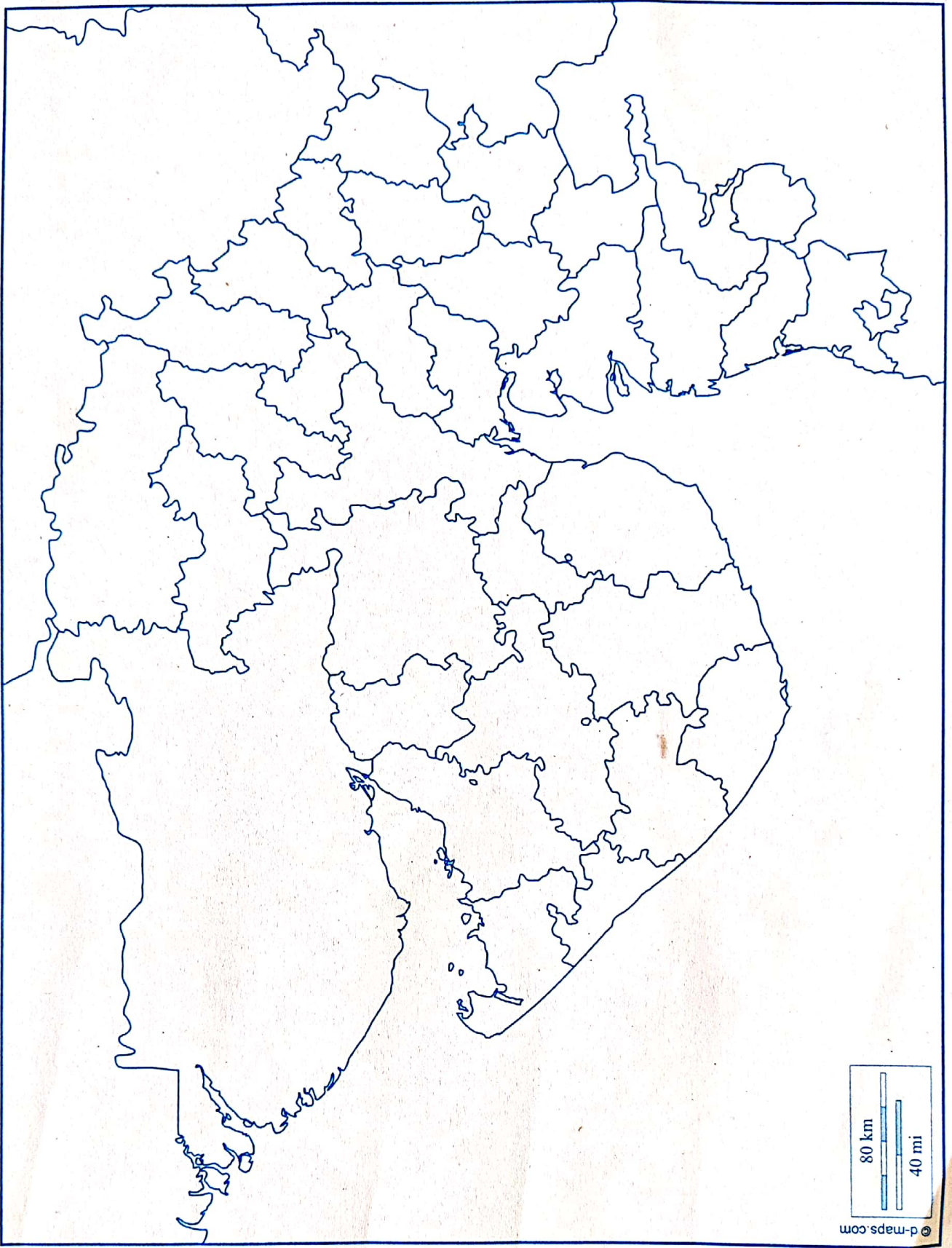
1. हस्तस्य भूषण दानं प्रयोजनम्॥
2. यथा चित्तं तथा साधूनामेकरूपता॥
3. सर्वतीर्थमयी पूजयेत् ॥

शेखर नं:

वर्ग:

धोरण:

विद्यार्थी नाम:



विद्यार्थीनुं नाम : _____

धोरण : _____ वर्ग : _____ रोल नं : _____