



Municipal School Board, Ahmedabad

Second Term Examination - 2020

Std.-5

Date : 26-3-20

Sub.-English

Total Marks - 40

Time : 11-00 to 1-00

Roll No. :- _____

Q. 1 (A) Read the paragraph and answer the questions.

(5)

We celebrated the 125th birth anniversary of Srinivasa Ramanujan in 2012. Inaugurating the year long celebration at university of Madras. Dr. Manmohan Singh declared 2012 as the National Mathematical Year and Ramanujan's birthday as the National Mathematics Day. A commemorative stamp in honour of Srinivasa Ramanujan was issued on the occasion.

- (1) What was the year 2012 declared as ?
- (2) What is Ramanujan's birthday celebrated as ?
- (3) What was done in honour of Ramanujan ?
- (4) Write the Correct option in the box given.
- (i) We celebrated (_____) of Ramanujan in 2012.
 - (A) 125th birth anniversary.
 - (B) 125th death anniversary.
 - (C) 25th birth anniversary.
 - (D) 25th death anniversary.
- (5) Give suitable title to the given paragraph.

(B) Read the paragraph and answer the questions.

(5)

All the boy's admired Bal's courage and his love for justice and truth. Even the teacher could not help praising Bal. He looked at the class and said, "Bal is not ordinary boy. If every student is as truthful and disciplined as he is, our country will have a great future."

- (1) What did the teacher say about Bal ?
- (2) Complete the sentence

If every student is _____ our country will have a great future.

(3) Write the correct option in the box given.

(1) The boys admire Bal's (_____)

(A) truth (B) Speech (C) courage (D) Innocence

(2) Bal loved (_____)

(A) Justice and truth (B) Innocence (C) courage (D) Fairness

(4) Give suitable title for given paragraph.

(C) Fill in the blanks selecting the appropriate dialogue from the box

(5)

(tell me what do you see now ? 'I'm not so good at archery, Yes Guruji, the test begins with you, come forward)

Drona : Bhim

Bhim : Me Guruji ?


Drona : Don't worry Bhim,

Bhim :

Drona : Bhim

Q. 2 (A) Complete the details based on the picture.

(5)



- (1) This is a picture of _____
- (2) Which leader is associated with it ? _____
- (3) Birth place of Mahatma Gandhi is _____
- (4) Where is this memorial ? _____
- (5) The other name given to Gandhiji. _____

(B) Differentiate the sentences between Holi and Independence day.

(5)

People purchase dates and popcorn from the market. Children gathered early in the morning in school to hoist the flag. It is festival of colours. Children love to play with colours. National flag was hoisted by our Principal sir.

Q. 3 (A) Do as directed

(A) Match the words of column A with the opposites in column B

(2)

A

B

- | | |
|--------------|--------------|
| (1) Multiply | (a) inactive |
| (2) Short | (b) divide |
| (3) agree | (c) long |
| (4) active | (d) disagree |

(B) Underline the adjective in the given sentence

(2)

- (1) There was a loud noise from the old house.
- (2) There were many young people in the new hall.

(C) Identify the tenses from the given sentences

(2)

- (1) Ravina will help him tomorrow.
- (2) Gita goes to gym every day.

(D) Identify noun from the given sentences.

(2)

- (1) The farmer is in the farm.
- (2) The wolf is near the sheep

(E) Identify the adjectives from the given sentences.

(2)

(1) Neel lives in a beautiful house.

(2) Maya wore a pretty dress.

Q. 4 (A) Write an essay on your favourite topic

(5)

(1) My Favourite National Leader.

(2) My Favourite Festival

(3) My Favourite Scientist



Municipal School Board, Ahmedabad

Second Term Examination - 2020

Std.-5

Date : 27-03-20

Sub.-Maths

Total Marks - 40

Time : 11-00 to 1-00



Roll No. :- _____

SECTION - A

Do as directed. (Que. 1 to 12 Each carries 1 mark)

(12)

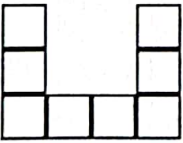
* Fill in the blanks. (Que. 1 to 4)

- (1) If we double the measurement of a side of a square than its area will be _____ times.
- (2) The shape of the dice is _____
- (3) Tally marks  = _____
- (4)  How many times do we have to fold this type of paper, if we want to make four equal parts ?

* Choose the correct option. (Que. 5 to 8)

- (5) The standard scale for a map is 1 cm = 200km. If in a map the distance between Bhopal to Jaipur is 2.5 cm, than what will be the distance from Bhopal to Jaipur in k.m. ?

(A) 250 k.m. (B) 300 k.m. (C) 500 k.m. (D) 25 k.m.

- (6)  How many cubes are used in the given shape ?

(A) 8 (B) 6 (C) 10 (D) 4


- (7) Convert 5 m 65cm into metre.

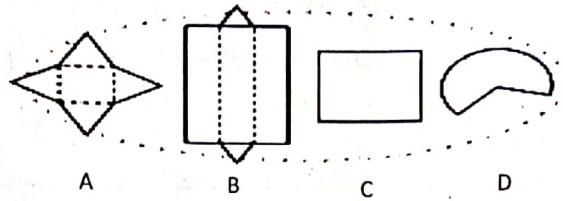
(A) 5065 m (B) 5.65 m (C) 56.50 m (D) 5650 m

- (8) Heena drinks 5 glasses of water every day, How much glasses of water will she drink in the month of April ?

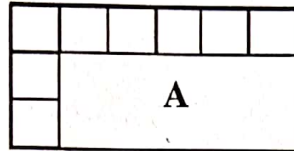
(A) 150 (B) 155 (C) 35 (D) 50

* Do as directed. (Que. 9 to 12)


(9) By folding which of the following figure we will get  shape ?



(10) How many squares can be fitted in the given area (A) if a side of a square is 1 cm ?



(11) What is the perimeter of given figure ?



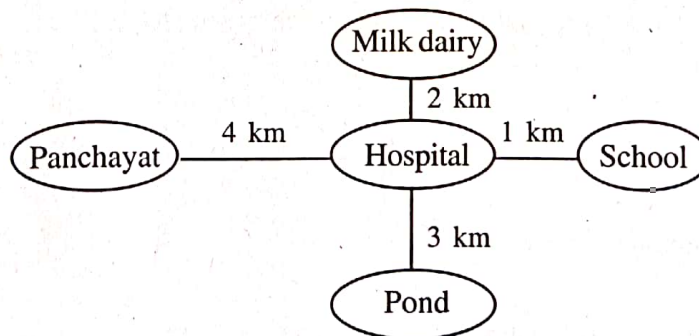
(12) How many boxes are needed for 90 oranges, if 1 box contains 15 oranges ?

SECTION - B

Do as directed. (Each que carries 2 marks, Que - 13 to 21)

(18)


(13) Answer the following questions based on given figure.



1. What is the distance from hospital to school ?

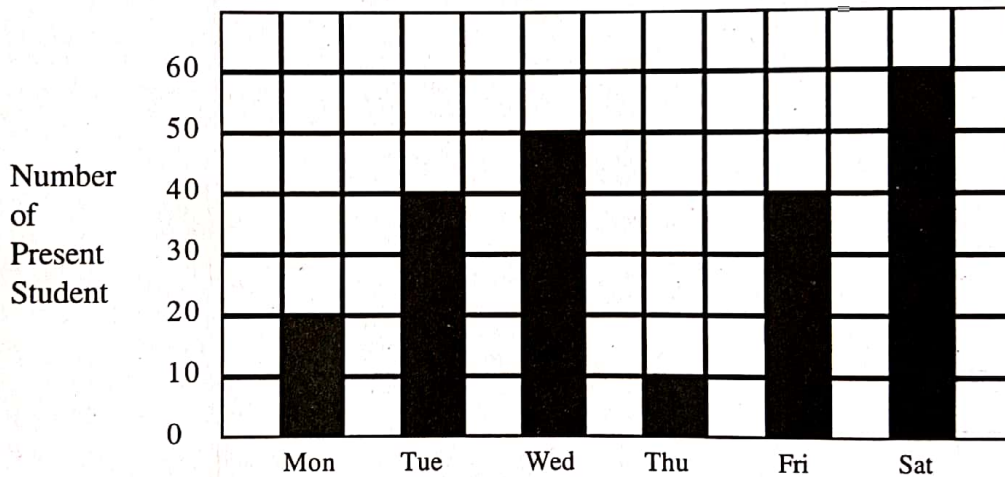
2. What is the distance from milk dairy to pond ?

(14) How many matchstick boxes can be seen from the top view in the following picture ?



(15) Ramesh's height is 1.25 m and Paresh's height is 1.10 m. So what is the difference of their heights ?

(16) Answer the following questions based on this Bar-graph.



(a) How many students are present on Monday ?


(b) On which day the highest number of students are present ?

(17) A cat drinks 2 litres of milk everyday. How many litres of milk will it drink in one year ?

(18) $729 \div 9$




- (19) If a brick's volume is 15 cm^3 , then what will be the volume of the following platform made of bricks in cm^3 ?



- (20) What will be the cost of 1 litre petrol, if 5 litres of petrol cost 360 rupees ?

- (21) What is the area of section 'A', if each square is of 1 cm^2 ?




Standard scale
 $1 \text{ cm} = 5 \text{ m}$

SECTION - C

Do as directed. (Each question carries 3 marks, Que - 22 to 23)

(6)

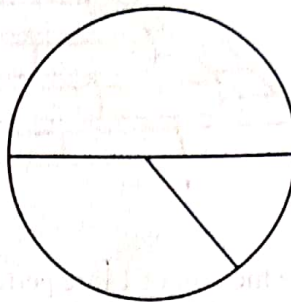
- (22) Fill in the blanks based on the diagram.



1. Length of a candle _____ cm.
2. Length of a flame _____ cm.
3. Difference _____ cm.

- (23) 100 children were asked about their favourite game. That information is given in the table. Draw a pie chart as given and fill data in it.

Game	Number of children
Cricket	50
Kabaddi	30
Kho-Kho	20



SECTION - D

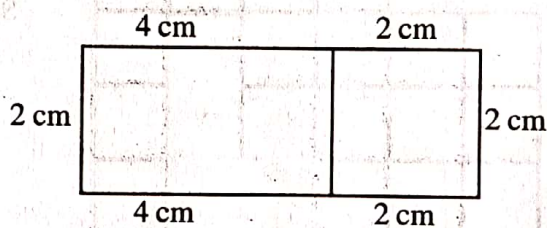
Do as directed.

- (24) The perimeter of a square tile is 240 cm. Find its area.

(4)

OR

Find the area of given figure.





नगर प्राथमिक शिक्षण समिति, अमदावाद

द्वितीय सत्रांत परीक्षा : 2020

धीरज्ञ-5

विषय - हिन्दी (निम्नस्तर)

तारीख :- 30-3-20

समय :- 11-00 थी 1-00

कुल गुण - 40

रजि. नं० :- _____

प्रश्न-1 (अ) सही विकल्प चुनकर प्रश्न के उत्तर लिखिए ।

(4)

(1) रमेश को जलेबी पसंद है।- रेखांकित शब्द का विरुद्धार्थी शब्द पहचानिए ।

(अ) नापसंद (ब) अपसंद (क) पहचान (ड) अच्छा

(2) 'वृक्ष' शब्द का समानार्थी शब्द कौन-सा है?

(अ) कुसुम (ब) टहनी (क) तना (ड) तरु

(3) टोकरी में सब्जियाँ हैं - रेखांकित शब्द का सही वचन परिवर्तन ढूँढिए ।

(अ) सब्जिया (ब) सब्जियों

(क) सब्जिएँ (ड) सब्जी

(4) लिंग परिवर्तन की सही जोड़ पहचानिए ।

(अ) धोबी - धोबन (ब) छात्र - छात्री

(क) गाय - बैल (ड) हाथी - हाथीनी

प्रश्न-1 (ब) नीचे दिए गए परिच्छेद को पढ़कर प्रश्नों के उत्तर लिखिए ।

(4)

एक तालाब था । उसमें ढेर सारे मेढक रहते थे । वहीं किनारे पर नीम का पेड़ था । पेड़ की जड़ में एक साँप रहता था । साँप रोज ही किसी मेढक को पकड़कर खा जाता था । मेढक परेशान हो उठे । एक दिन उन्होंने आपस में मिलकर एक उपाय सोचा । अगले दिन एक मेढक बिल के सामने खड़ा रहा । दूसरे सारे मेढक बिल के आस-पास छिप गए । जैसे ही साँप ने उस मेढक को पकड़ा, बाकी छिपे मेढक निकल आए और साँप की पूँछ पकड़कर खींचने लगे । साँप घबराया और पकड़े हुए मेढक को छोड़कर भागा । सारे मेढक ताली बजाकर नाचने लगे ।

प्रश्न:

- (1) तालाब में कौन रहते थे ?
- (2) मेढक को पकड़कर कौन खा जाता था ?
- (3) मेढकों ने आपस में मिलकर क्या सोचा ?
- (4) परिच्छेद का उचित शीर्षक दीजिए।

प्रश्न -2 (अ) चित्र देखकर चार वाक्य लिखिए ।

(4)



प्रश्न -2 (ब) काव्यपंक्तियाँ पूर्ण कीजिए ।

(2)

सूरज की.....

.....गले लगाना ।

प्रश्न-2 (क) नीचे दिए गए शब्दों के समानार्थी शब्द देकर मूल शब्द का वाक्य में प्रयोग कीजिए।

(2)

(1) सरताज (2) दोपहर

प्रश्न -3 निम्नलिखित प्रश्नों के उत्तर लिखिए । (किन्हीं चार)

(8)

- (1) फूल और मछली से हमें क्या सीख मिलती है?
- (2) आप अब्दुल कादिर की जगह होते तो क्या करते ?
- (3) मोहल्ले में गंदगी क्यों फैली हुई थी ?
- (4) हमें अपना घर और मोहल्ला क्यों साफ रखना चाहिए ?
- (5) दुमदुमा गाँव के बच्चोंने पानी की कमी दूर करने के लिए क्या किया?

प्रश्न -4 सूचना के अनुसार लिखिए ।

(अ) निम्नलिखित शब्दों को शब्दकोश के क्रम में लिखिए । (2)

(1) बादल, कड़ाही, दुमदुमा

(2) षट्कोण, सूरज, शरबत

(ब) मुहावरे का अर्थ देकर वाक्य में प्रयोग कीजिए । (2)

नेक रास्ते पर चलना

(क) मातृभाषा में अनुवाद कीजिए । (4)

गिरनार पर्वत गुजरात राज्य के जूनागढ़ जिले में स्थित है । इस पर्वत में पाँच ऊँचे शिखर हैं । गिरनार पर्वत गुजरात का सबसे ऊँचा पर्वत है । गिरनार पर्वत में 9999 सीढ़ियाँ हैं ।

प्रश्न -5 (अ) निम्नलिखित प्रश्नों के उत्तर एक-एक वाक्य में लिखिए । (4)

(1) भारतमाता की शान कौन हैं?

(2) दूध और पानी से हमें क्या सीख मिलती है?

(3) हम कैसे आगे बढ़ सकते हैं?

(4) आपको खाने में कौन-सी मीठी चीजें पसंद हैं?

प्रश्न -5 (ब) किसी एक विषय पर निबंध लिखिए । (4)

(1) स्वच्छता :

स्वच्छता की पहचान - स्वच्छता का महत्व - स्वच्छता के अभाव से होनेवाले नुकसान
- स्वच्छता रखने की प्रतिज्ञा ।

(2) हाथी :

शरीर का वर्णन - निवास - खुराक - उपयोग ।

(3) मेरी पाठशाला :

पाठशाला का नाम - कक्षा - स्थान - सुविधाएँ - महत्व ।



નગર પ્રાથમિક શિક્ષણ સમિતિ, અમદાવાદ
દ્વિતીય સત્રાંત પરીક્ષા - 2020

તારીખ :- ૩-૪-૨૦

ધોરણ-5

સમય :- ૧૨-૦૦ થી ૨-૦૦

વિષય - પ્રાદેશિક ભાષા

કુલ ગુણ - 40

વિદ્યાર્થીનું નામ :- _____

રજિ. નંબર :- _____

શાળાનું નામ :- _____

વર્ગ :- _____

પ્રશ્ન ક્રમાંક	1	2	3	4	5	કુલ ગુણ
પ્રશ્નના ગુણ	8	8	8	8	8	40
મેળવેલ ગુણ						

નિરીક્ષકની સહી :- _____

પરીક્ષકની સહી :- _____

પ્રશ્ન : 1 (ક) નીચેનાં વાક્યો સ્વચ્છ અને સુંદર અક્ષરે લખો.

(4)

(1) મરઘી તો તોય નિરાશ ના થઈ.

(2) ગઈ ૧૫મી તારીખે મારો જન્મદિવસ હતો.

(3) બકરી બહેન કોને કહે છે ?

(4) નદી તો બહુ મોટી હતી.

(ખ) નીચેની કાવ્યપંક્તિ પૂર્ણ કરો.

(4)

કેસૂડાંની કળીએ

.....

.....

..... પિયકારી ઊડે.

પ્રશ્ન : 2 (ક) નીચે આપેલા શબ્દોને શબ્દકોશના ક્રમમાં ગોઠવો.

(4)

(કૂલ, તળાવ, કમળ, ઝાડ, પાંદડું, ખેતર, મકાઈ, વાહનો)

(1) _____ (2) _____ (3) _____ (4) _____

(5) _____ (6) _____ (7) _____ (8) _____

(ખ) નીચેનાં વાક્યો કોણ બોલે છે તે લખો.

(4)

(1) “મરઘીબાઈ મને વખત જ ક્યાં છે?”

(2) તારા મમ્મી-પાપાને મારા પ્રણામ કહેજે.

(3) લો, શેરડીનો એક ભારો તમને આપો.

(4) નાહ્ય કોણ ? તરે કોણ ?

પ્રશ્ન : ૩. (ક) યોગ્ય શબ્દ પસંદ કરી ખાલી જગ્યા પૂરો.

(4)

(૧૫મી, ગોળ, કઠણ, નદી)

(1) મા બચ્ચાને પાસે લઈ ગઈ.

(2) કાચબાની પીઠ હોય છે.

(3) બકરીએ ની ભીંત બનાવી.

(4) મેઘાનો જન્મદિવસ તારીખે હતો.

(ખ) નીચેનામાંથી કોઈ પણ એક વિશે ચાર-પાંચ વાક્યો લખો.

(4)

(1) ઉત્તરાયણ (2) મારી શાળા

પ્રશ્ન : 4 નીચેના પ્રશ્નોના જવાબ લખો. (ગમે તે ચાર)

(8)

(1) બાવાને જમવા માટે શું શું જોઈએ છે ?

(2) મરઘીબાઈએ મકાઈ કોને કોને આપી ?

(3) મેઘાએ જન્મદિવસ ક્યાં ઊજવ્યો ?

(4) ફાગણ મહિનામાં કયો તહેવાર આવે છે ?

(5) શેરડીવાળાએ બકરીબહેનને શું આપ્યું ?

પ્રશ્ન : 5 (ક) નીચે આપેલા શબ્દોના સમાનાર્થી શબ્દો લખો.

(4)

(1) દીવાલ - _____

(2) માર્ગ - _____

(3) ઝડ - _____

(4) મોકો - _____

(ખ) નીચે આપેલા શબ્દોના વિરોધી શબ્દ લખો.

(4)

(1) થોડું X _____

(2) આવવું X _____

(3) નાનો X _____

(4) ના X _____



Municipal School Board, Ahmedabad

Second Term Examination - 2020

Std.-5

Date : 28-03-20

Sub.-Environment (Around us)

Total Marks - 40

Time : 11-00 to 1-00

Roll No. :- _____

Q. 1 (A) Fill in the blanks with the appropriate words. (4)

- (1) Khaman is prepared by _____ method of cooking.
- (2) _____ is present in the space between particles of soil.
- (3) One who dies for his faith or belief in his country or city or village is called _____
- (4) Water when heated gets converted into _____

(B) Make a tick mark (✓) against the true statement and a cross (X) against the false statement. (4)

- (1) Road accident is a disaster.
- (2) Lungs are not a part of blood circulatory system.
- (3) Clayey soil becomes sticky and slippery after it rains.
- (4) A habit of eating spicy and fried food is good for health.

Q. 2 (A) Choose the correct alternative from those given below each question and write its index letter in the provided against each question. (4)

- (1) Who broke the statue made by the Britishers in Maghraj village ?
 - (A) Vinod sing
 - (B) P. Kumar
 - (C) Poonamchand Pandya
 - (D) Ranjit Gupta

(2) What do we gain from a balanced diet ?

(A) Energy

(B) Protein

(C) Vitamin

(D) All of the above

(3) Which soil has high proportion of organic matter ?

(A) Sandy

(B) Clayey

(C) Alluvial

(D) Sandy and clayey

(4) I am a type of blood vessel.

(A) Foodpipe

(B) Windpipe

(C) Stomach

(D) Artery

(B) Match the columns.

(4)

Column 'A'

Column 'B'

(1) Sarpanch

(A) District administrative officer

(2) President

(B) Taluka administrative officer

(3) District development officer

(C) Head of Zilla Panchayat

(4) Taluka development officer

(D) Head of Gram Panchayat

(E) Administrative officer of

Gram Panchayat

Q. 3 (A) Classify the following festivals in winter, summer and monsoon. (4)

Guru nanak jayanti, Christmas, Holi, Diwali, Dussehra, Independence Day, Ram Navami, Uttarayan)

Winter	Summer	Monsoon

(B) Do as directed. (4)

Write the words in the correct order.

Example :- Flour, chapati, wheat, rolling board and pin, pan

Answer :- Wheat → flour → rolling → board and pin → pan → chapati.

(1) kiln, clay, pot; colour, potter's wheel.

(2) Mill, farm, shirt, cotton, cotton plant.

Q. 4 Answer the following questions in short. (8)

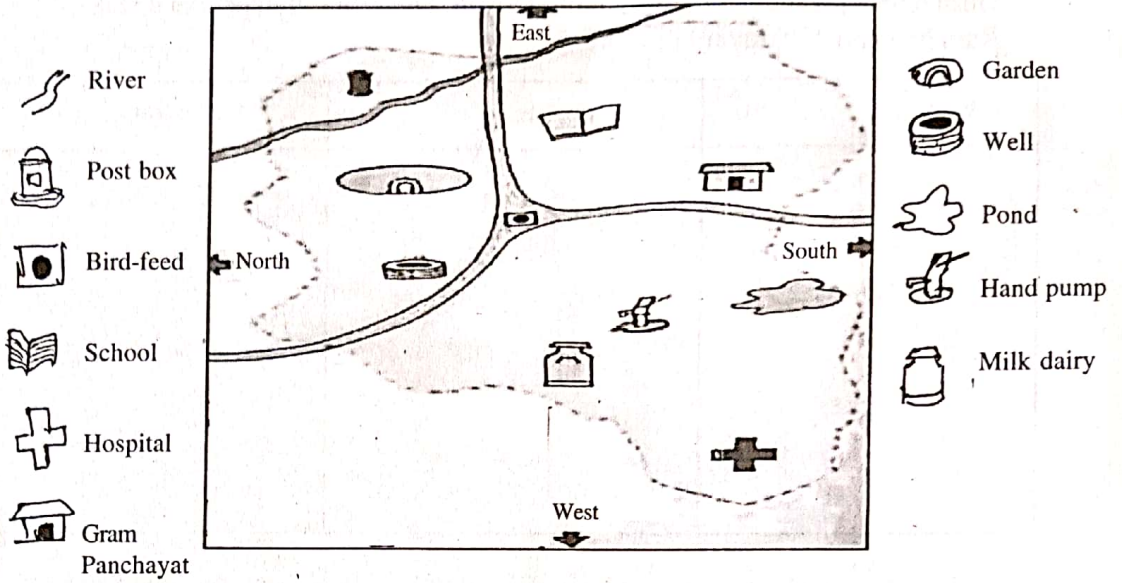
- (1) Which type of food should not be eaten ?
- (2) What are the components of soil ?
- (3) Write the names of organs of the blood circulatory system.
- (4) Which things carpenter needs to make a chair ?

Q. 5 (A) Answer the following questions in brief. (4)

- (1) What damage is caused due to floods ?
- (2) What steps will you take if an epidemic breaks out in your village ?

(B) Observe the map of village and answer the questions given below.

(4)



- (1) In which direction of the gram panchyat is the garden situated ?
- (2) What is situated nearest to the hospital ?
- (3) What is situated on the north of handpump ?
- (4) In which direction we have to go to reach school from the milk dairy.