



Municipal School Board, Ahmedabad

Second Term Examination - 2020

Std.-4

Date : 26-03-20

Sub.-English (Language)

Total Marks - 40

Time : 11-00 to 1-00

Roll No. :- _____

Name of the Student : _____

Name of the School : _____

Question Numbers	1	2	3	4	Total Marks
Marks of Que.	15	10	10	5	40
Marks obtained					

Sup's Sign :- _____

Exam's Sign :- _____

Q. 1 (A) Read the story then answer the questions

(5)

Once upon a time, there was a poor fisherman who lived in a small shack.

One day, he went out to the sea to catch fish on his boat when he pulled up his net, he was surprised to find a shiny golden fish trapped in his net.

"Please let me go you kind man !" cried the golden fish. The fisherman shocked to see a talking fish. He pitied the fish and put it back to the sea.

The golden fish was very grateful. He said to the fisherman, "I shall repay your kindness."

When fisherman returned to his home, he was amazed to see his small shack changed into a big house.

(1) Where did the poor fisherman live in ?

(2) How did the fisherman go to the sea ?

(3) Why was the fisherman surprised after pulling in his net ?

(4) Why did the fisherman put golden fish back to the sea ?

(5) How did he golden fish repay the fisherman's kindness ?

(B) Fill in the blanks with the appropriate word from bracket :

(truth, satyagraha, barrister, South Africa, Kasturba, Porbandar, October 2, Mohandas Karamchand, England, Rajkot)

(5)

Mahatma Gandhi was born at _____ in Saurashtra, on _____, 1869. His full name was _____ Gandhi. He was married to _____. He was educated in _____. Later, he went to _____ and became a _____. He went to _____ to practice law. He believed in the weapon of _____. He believed in _____ and non-violence.

(C) Fill in the blanks with adverbs.

(5)

- (1) The children sang _____ (happy)
- (2) I am _____ waiting to watch cartoon films (eager)
- (3) The teacher shouted _____ at the students. (angry)
- (4) Please do not talk _____ (loud)
- (5) The army fought _____. (brave)

Q. 2

(A) Read the paragraph and answer the questions

(5)

After some time, the inspector left. The teacher was angry. The teacher said to Mohan "I made a sign to you, but you did not understand."

The other students laughed at him, but Mohan was not sorry. Mohan was honest. He did not cheat himself or others perhaps this made him a Mahatma.'

- (1) Why was the teacher angry ?

- (2) Was Mohan sorry for not copying ?

- (3) Write correct option (A, B, C, D) in the box given

- (1) Mohan's teacher was _____
(A) Sad (B) happy (C) angry (D) honest.

- (2) The _____ laughed at Mohan.
(A) Teacher (B) Inspector (C) Principal (D) Students

- (3) Mohan did not _____ himself or others.
(A) cheat (B) help (C) doubt (D) laugh at

(B) Match A with B.

(5)

A

B

(1) Mohan rings

(A) A kite

(2) We play

(B) us a poem

(3) The teacher teaches

(C) football

(4) I fly

(D) the bell

(5) Richa buys

(E) a dress

(1-) (2-) (3-) (4-) (5-)

Q. 3 (A) Do as directed.

(A) Write the following words in alphabetical order

(2)

world, cloud, sky, bucket.

(B) Write sentences using the following words

(2)

(1) garden : _____

(2) beautiful : _____

(C) Cross out the word that is wrong

(2)

(1) The Parrot / Peacock is our national bird

(2) The Sun / Moon is a big star.

(D) Put the words in the correct order and make a sentence

(2)

(1) I apples red like.

(2) Pumpkin big is my.

(E) Complete the following poem.

(2)

How beautiful _____

_____ narrow lane.

Q. 4 Write about 5-6 sentences on any one of the following

- (1) My School
- (2) My favourite fruit
- (3) Trees



Municipal School Board, Ahmedabad

Second Term Examination - 2020

Std.-4

Date : 28-03-20

Sub.-Environment

Time : 11-00 to 1-00

Total Marks - 40

Roll No. :- _____

Name of the Student : _____

Name of the School : _____

Question Numbers	1	2	3	4	5	Total Marks
Marks of Que.	8	8	4	8	12	40
Marks obtained						

Sup's Sign :- _____

Exam's Sign :- _____

Q. 1 (A) Fill in the blanks with the appropriate words. (4)

(1) There are total _____ districts in gujarat.

(2) _____ panchayat works in the village.

(3) _____ wrote our national anthem.

(4) _____ is a transparent object.

(B) Choose the correct alternative from those given below each question and write its index letter in the provided against each question. (4)

(1) In which organ does the food enters from the food pipe ?

(A) stomach (B) small intestine (C) heart (D) lungs

(2) Which professional produces salt from sea water ?

(A) cattle rearer (B) farmer (C) fisherman (D) salt panner

(3) Which substance is opaque ?

(A) glass (B) wood (C) water (D) air

(4) Which object remains floating in the water ?

(A) pin (B) stone (C) sugar (D) wood

Q.2 (A) Make a tick mark ✓ against the true statement and a cross ✗ against the false statement.

(4)

- (1) We must respect our national symbols.
- (2) We should eat food quickly without much chewing.
- (3) People should use water in proper way.
- (4) One must eat an open and stale food sold in the market.

(B) Match the columns :

(4)

Column 'A'		Answer	Column 'B'	
(1)	Fishes	(1 -)	A	Grain Parcher
(2)	Sweets	(2 -)	B	Baker
(3)	Groundnut-gram	(3 -)	C	Confectioner
(4)	Biscuit	(4 -)	D	Fisherman

Q.3 Classify the following objects as transparent and opaque.

(4)

(buttermilk, leaf, water, glass, rubber, air, wood, paper)

Transparent Substances	Opaque Substances

Q. 4 (A) Answer the following questions in one or two sentences.

(4)

(1) What is the name of your school ?

(2) What works are performed by Grampanchayat ?

(3) Which are our National symbols ?

(4) Where should we throw garbage ?

(B) Give reasons for the following.

(4)

(1) The food must be properly chewed.

(2) One should not eat an open and stale food sold in the market.

(3) We should keep our surrounding clean.

Q. 5 (A) Answer the following questions in three or four sentences. (Any Two)

(8)

(1) What should be done while National Anthem is being sung ?

(2) Which public facilities are available in your area ?

(3) Write the names of food items which are prepared from milk.

(B) Draw symbols of the following.

(4)

(1) House :

(2) Tree :

(3) Post Office :

(4) Hospital :



નગર પ્રાથમિક શિક્ષણ સમિતિ, અમદાવાદ

દ્વિતીય સત્રાંત પરીક્ષા : ૨૦૨૦

ધોરણ-૪

વિષય - પ્રાદેશિક ભાષા

તારીખ :- ૩-૪-૨૦

સમય :- ૧૨-૦૦ થી ૨-૦૦

કુલ ગુણ - ૪૦

વિદ્યાર્થીનું નામ :- _____

રજિ. નંબર :- _____

શાળાનું નામ :- _____

વર્ગ :- _____

પ્રશ્ન ક્રમાંક	૧	૨	૩	૪	૫	કુલ ગુણ
પ્રશ્નના ગુણ	૮	૮	૮	૮	૮	૪૦
મેળવેલ ગુણ						

નિરીક્ષકની સહી :- _____

પરીક્ષકની સહી :- _____

પ્રશ્ન : ૧ (ક) આપેલાં વાક્યો સારા અક્ષરે લખો.

(૪)

(૧) સસલાની દુકાનમાં રમકડાં ગોઠવાઈ ગયા.

(૨) ઘરે પહોંચી માજીએ શાકભાજી ધોયાં.

(૩) બધાંના ચહેરા પર ખૂબ જ આનંદ હતો.

(૪) સેજન, મોનિકા અને ગોપીએ ગીત ગાયું અને અભિનય કર્યો.

(ખ) નીચેનાં વિધાનોમાંથી સાચાં વિધાનો સામે (✓)ની અને ખોટાં વિધાનો સામે (X)ની નિશાની કરો. (૪)

(૧) વિરલની દુકાનમાં રમકડાં ગોઠવાઈ ગયાં.

(૨) લીલાં મરચાં તીખાં લાગે.

(૩) કોઈએ મેળામાંથી ઢોલ લીધો.

(૪) ગુજરાતનું પાટનગર અમદાવાદ છે.

પ્રશ્ન : ૨ (ક) જોડકાં જોડો.

(૪)

અ	બ
(૧) શિંગડાં	(અ) પાલક
(૨) પાંખો	(બ) ગાય
(૩) ફળ	(ક) કબૂતર
(૪) શાકભાજી	(ડ) કેળાં

જવાબ (૧) _____ (૨) _____ (૩) _____ (૪) _____

(ખ) નમૂના પ્રમાણે લખો.

(૪)

ચાલી - ચાલ્યો

(૧) હસી - _____

(૨) ઊઠી - _____

(૩) કુદી - _____

(૪) બોલી - _____

પ્રશ્ન : ૩ (ક) શબ્દોનો ઉપયોગ કરી વાક્ય બનાવી લખો.

(૪)

(૧) તારામંડળ

(૨) ઢોલ

(૩) પેન્સિલ

(૪) દાદાજી

(ખ) નીચેના શબ્દોના વિરુદ્ધાર્થી શબ્દો લખો.

(૪)

(૧) ધરતી - _____

(૨) હસવું - _____

(૩) જાગવું - _____

(૪) મારું - _____

સ્વ. : ૪ (ક) કાવ્યપંક્તિ પૂર્ણ કરો.

(૪)

ઊગીને પૂર્વમાં

.....

.....

..... દક્ષિણ જી રે !

(ખ) જુદા પડતા શબ્દ ઉપર ○ બનાવો.

(૪)

(૧) કેળાં, ચીકુ, કેરી, ભીંડા

(૨) કબૂતર, મોર, ગાય, હંસ

(૩) મામા, કાકા, રામ, માસી

(૪) ટેબલ, પેન, પેન્સિલ, નોટબુક

પ્રશ્ન : ૫ (ક) નીચેના પ્રશ્નોના જવાબ એક વાક્યમાં લખો. (ગમે તે ચાર)

(૪)

(૧) માજીએ કોને ભાજી આપી ?

(૨) હરણની ચાલ કેવી છે ?

(૩) સ્મિતા કોની સાથે બજારમાં જતી હતી ?

(૪) ગુજરાતના બે મહાપુરુષોનાં નામ લખો.

(૫) ભાઈએ શું પાળ્યું હતું ?

(ખ) ચાર રંગોનાં નામ લખો.

(૪)

(૧) _____

(૨) _____

(૩) _____

(૪) _____



नगर प्राथमिक शिक्षण सभिति, अमदावाढ

द्वितीय सत्रांत परीक्षा : २०२०

धोरण-४

विषय - छिन्दी

तारीख :- ३०-३-२०

समय :- ११-०० थी १-००

कुल गुण - ४०

रजि. नंबर :- _____

विद्यार्थीनुं नाम :- _____

वर्ग :- _____

शाणानुं नाम :- _____

प्रश्न क्रमांक	१	२	३	४	५	कुल गुण
प्रश्नना गुण	८	८	८	८	८	४०
भेणवेल गुण						

निरीक्षकनी सळी :- _____

परीक्षकनी सळी :- _____

प्रश्न : 1(अ) चित्र पहचानकर हिन्दी में नाम लिखिए ।


06

(1)



.....

(2)



.....

(3)



.....

(4)



.....

(5)



.....

(6)



.....

प्रश्न : 1(ब) चित्र के आधार पर वाक्य लिखिए ।

02

उदाहरण :



यह घोड़ा है ।



वह घोड़ा है ।

(1)



यह पंतग है ।



(2)



यह पुस्तक है।



प्रश्न : 2 प्रश्नों के उत्तर लिखिए । (किन्हीं चार)

08

(1) हाथी क्या-क्या खाता है ?

(2) आपने कहाँ-कहाँ झूलें देखे हैं ?


(3) बुढ़िया को सबसे ज्यादा डर किससे लगता था ?

(4) कशीदेकार क्या सुनकर घबराया ?

(5) कशीदेकार क्या करता था ?

प्रश्न : 3(अ) चित्र देखकर चार वाक्य लिखिए ।

04



.....

.....

.....

.....

.....

प्रश्न : 3(ब) गिनती को अंकों में लिखिए ।

02

(1) बारह : (2) पंद्रह :

प्रश्न : 3(क) गिनती को शब्दों में लिखिए ।

02

(1) ३ : (2) ८ :

प्रश्न : 4 सूचना के अनुसार कीजिए ।

(अ) शब्दों का अर्थ देकर वाक्य में प्रयोग कीजिए ।

02

1. परेशान -

वाक्य :

2. झुँझलाना -

वाक्य :

(ब) विरुद्धार्थी शब्द देकर वाक्य में प्रयोग कीजिए ।

02

1. आज ×

वाक्य :

2. हँसना ×
वाक्य :

(क) लिंग परिवर्तन करके वाक्य फिर-से लिखिए ।

02

1. बच्चा खेल रहा है ।
.....

2. घोड़ा दौड़ रहा है ।
.....

(ड) वचन परिवर्तन करके वाक्य फिर-से लिखिए ।

02

1. यह हाथी है ।
.....

2. यह माला है ।
.....

प्रश्न : 5(अ) काव्यपंक्ति पूर्ण कीजिए ।

02

जब पानी में जाता
.....
.....
.....नहीं बताता हाथी ।

प्रश्न : 5(ब) आधे अधूरे वाक्य पूर्ण कीजिए ।

02

1. कौआ है । उसका रंग काला है । (यह, वह)
2. मैं खेल खेल । (रहा हूँ, रहे है)

प्रश्न : 5(क) किसी एक विषय पर चार-पाँच वाक्य लिखिए ।

04

(1) मेरा प्रिय पक्षी

(2) मेरी पाठशाला



Municipal School Board, Ahmedabad
Second Term Examination - 2020

Std.-4

Date : 27-3-20

Sub.-Mathematics

Time : 11-00 to 1-00

Total Marks - 40

Roll No. :- _____

Name of the Student : _____

Name of the School : _____

Question Numbers	A	B	C	D	Total Marks
Marks of Que.	12	18	6	4	40
Marks obtained					

Sup's Sign :- _____ Exam's Sign :- _____

SECTION - A

Do as directed :- (Each Que carries 1 mark Que. 1 to 12)

(12)

* Select the correct alternative and write in given . (Que. 1 to 4)

(1) How many radii can be drawn in a circle ?

- (a) One (b) two (c) three (d) infinite

(2) AZ, BY, CX, _____ (Complete the pattern)

- (a) WD (b) DW (c) DX (d) DY

(3) 10, 14, 18, 22, _____ (complete the pattern)

- (a) 23 (b) 26 (c) 24 (d) 21

(4) Iron, paper, wood and cotton are filled in four different bags respectively than which

bag will you feel heaviest ?

- (a) Iron (b) Paper (c) Wood (d) Cotton

* Fill in the blanks. (Q. 5 to 8)


(5) 2 kg = _____ gm

(6) Complete the pattern A₁ B₃ C₅ D₇ _____

(7) How many legs do seven cats have ? _____

(8) From the wheels of a bicycle and a autorikshaw, has a greater radius, _____

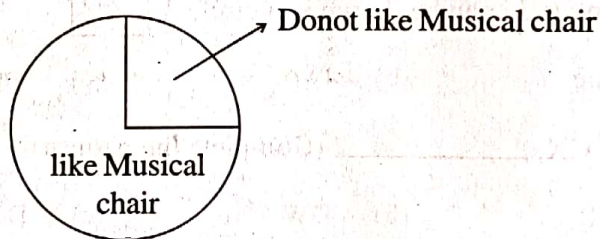
(9) Shade $\frac{1}{4}$ part of given figure.



(10) Continue the pattern.



(11) Who likes the musical - chair game ? After asking this question teacher had made a pie chart based on the answers.



• Write whether following statement is true or false on the basis of above information

A quarter of children do not like the game of musical chair _____

(12) Find out from the following table :-

(A) How many more children like to eat "Gulabjamun"

than the number of children like to eat 'Mohanthal' ? _____


Favourite item	Number of children
Ladu	20
Mohanthal	20
Gulabjamun	40

SECTION- B


Do as directed (Q. 13 to 21) (Each question carry 2 marks)

(18)

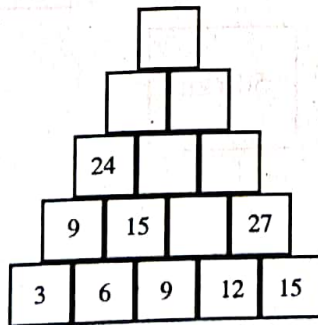
(13) Draw a circle with a radius of 3cm using a rounder.



(14) Measure and write the length of the radius in the circle using the scale _____

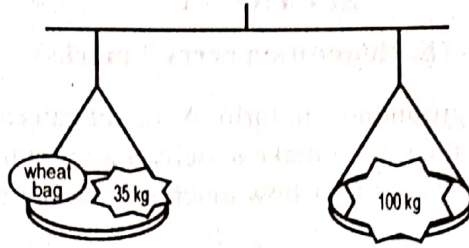


(15) Complete the following chart.



(16) A green grocer has 96kg of tomatoes. One basket can contain 8kg tomatoes. So how many baskets are needed to contain all these tomatoes,

(17) In a given balance both sides are equal so what is the weight of wheat bag ?

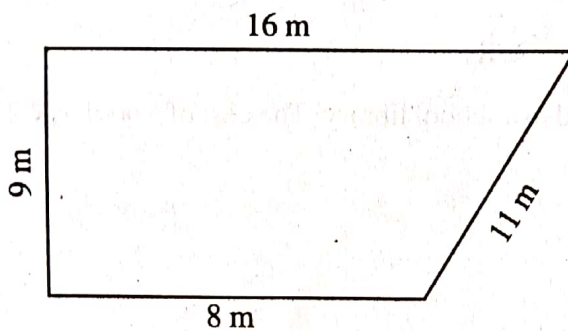


(18) What do you buy from grocery shop in kilograms and in grams ? Give its two names.


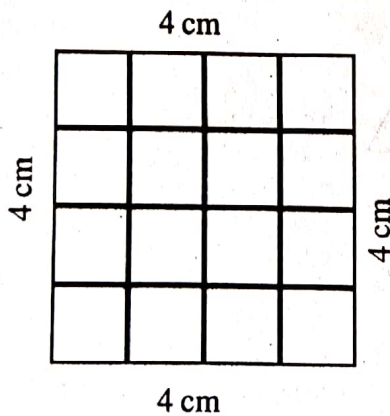
Two things to buy in kilograms _____, _____

Two things to buy in grams _____, _____

(19) Write down the length of the given field in metre _____

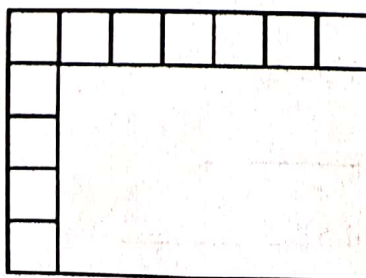


(20) From the 16 cm boundary, two squares of 1 cm × 1 cm are removed then find out the boundary of remaining shape 'B' ?



Shape "B"

(21) How many squares of 1 cm × 1 cm can be fill in the empty part of a given rectangle. _____



SECTION- C

Do as directed (Q. 22 to 23) (Each question carry 3 marks)


(6)

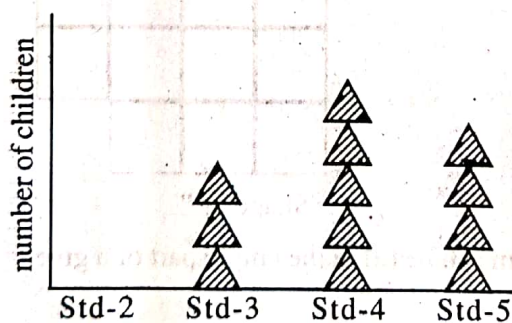
- (22) There are 240 bags of groundnuts in farm. A tractor can carry 60 bags at one time. So how many rounds will the tractor make to deliver all groundnuts bags at home ? If the total charge for one round is ₹ 800, how much will farmer pay the for all rounds ?

OR

- (22) If 12 story books are purchased in a school library. The cost of a book is ₹ 25. Then find the total cost of all the books.

- (23) Answer the questions based on a graph.

 = 10 children



1. There are 20 children in std-2 show it in a graph.

2. Which standard has the most children ? _____

3. What is the total number of children in std-5 ? _____