



Municipal School Board, Ahmedabad  
Second Term Examination - 2020  
Std.-3

Date : 26-03-20

Time : 11-00 to 1-00

Sub.-English (Language)

Total Marks - 40

Roll No. :- \_\_\_\_\_

Name of the Student : \_\_\_\_\_

Name of the School : \_\_\_\_\_

Question Numbers	1	2	3	4	Total Marks
Marks of Que.	15	10	10	5	40
Marks obtained					

Sup's Sign :- \_\_\_\_\_ Exam's Sign :- \_\_\_\_\_

Q.1 (A) Read the story then answer the questions (5)

Larry is a frog. Larry is green with brown spots. He loves to play in the pond.  
Sometime Larry catches flies. He likes to eat flies for dinner. After Larry catches flies, he hops around the pond.

- (1) What is Larry ?  
\_\_\_\_\_  
\_\_\_\_\_
- (2) What color is Larry ?  
\_\_\_\_\_  
\_\_\_\_\_
- (3) Where does Larry love to play ?  
\_\_\_\_\_  
\_\_\_\_\_
- (4) What does Larry catch ?  
\_\_\_\_\_  
\_\_\_\_\_
- (5) What does Larry like to eat for dinner ?  
\_\_\_\_\_  
\_\_\_\_\_

(B) Read the paragraph and answer the questions.

(5)

The courtier who had the emperor's ring was shocked and immediately moved his finger over his beard. Birbal noticed this act of the courtier. He immediately pointed towards the courtier and said "Please search this man. He has the emperor's ring."

Akbar could not understand how Birbal managed to find the ring. Birbal then told Akbar that a guilty person is always scared.

Questions.

(A) Fill in the blanks.

- (1) The courtier who had the ring was \_\_\_\_\_ .  
(2) A \_\_\_\_\_ person is always scared.

(B) Write the correct option (A, B, C or D) in the box given.

- (1) The courtier who had the ring. \_\_\_\_\_  
(A) moved his finger over his hair.  
(B) Moved his finger over his nose.  
(C) Moved his finger over his chin.  
(D) Moved his finger over his beard.

- (2) \_\_\_\_\_ noticed the act of the courtier.

(A) Akbar (B) Birbal (C) A courtier (D) A guard

- (3) A guilty person is \_\_\_\_\_

(A) always scared. (B) always brave (C) always nervous (D) Always calm

(C) Read the poem and say whether the following statements are True or false. (5)

A piper in the streets today.

set up and tuned,

And started to play.

And away, away, away on the tide.

of his music we started;

on every side.

Doors and windows were opened wide.

And men left their work and came

And women with petticoats coloured like flame.

And little bare feet that were blue with cold,

Went dancing back to the age of gold.

And all the world went gray.

went gay,

for half an hour in the streets today.

- (1) The piper plays upon his pipe every day \_\_\_\_\_ .
- (2) Only men and women were fascinated by the piper's music. \_\_\_\_\_
- (3) It was summer when the piper sat to play. \_\_\_\_\_
- (4) Everyone who heard the music was very delighted. \_\_\_\_\_
- (5) The piper played on his pipe the whole day. \_\_\_\_\_

**Q. 2 (A) Find out any five names of fruits, Bird or Animals from the box given below. (5)**

D	C	P	C	O	W
O	R	A	N	G	E
G	O	A	T	N	V
S	W	O	C	A	T
C	Q	F	U	M	B

Fruits : (1) \_\_\_\_\_ (2) \_\_\_\_\_

Animals : (1) \_\_\_\_\_ (2) \_\_\_\_\_

Bird : (1) \_\_\_\_\_

**(B) Fill in the blanks with the correct adjectives from the box. (5)**

(smart, old, beautiful, small, soft)

- (1) This is an \_\_\_\_\_ house.
- (2) The Rose is a \_\_\_\_\_ flower.
- (3) Manoj is a \_\_\_\_\_ boy.
- (4) The grass in the garden is green and \_\_\_\_\_ .
- (5) Patan is a \_\_\_\_\_ Town.

**Q. 3 (A) Do as directed. (2)**

Write the following words in alphabetical order.

nails, flute, ship, boat

\_\_\_\_\_ , \_\_\_\_\_ , \_\_\_\_\_ , \_\_\_\_\_

**(B) Write antonyms of words given below. (2)**

(1) Tall \_\_\_\_\_

(2) Costly \_\_\_\_\_

**(C) Write synonyms of words given below. (2)**

(1) Award - \_\_\_\_\_

(2) Everyday - \_\_\_\_\_



(D) Fill in the missing letters.

(2)

(1) F\_\_th\_\_r

(2) F\_\_mi\_\_y

(E) Make sentence using the words given below.

(2)

(1) King

---

(2) House

---

Q. 4 Write about 5-6 sentences on any one of the following.

(5)

(1) My Favourite Animal.

(2) My self

(3) Holi

---

---

---

---

---

---

---

---

---

---



# Municipal School Board, Ahmedabad

## Second Term Examination - 2020

### Std.-3

#### Sub.-Environment

Date : 28-03-20

Time : 11-00 to 1-00

Total Marks - 40

Roll No. :- \_\_\_\_\_

Name of the Student : \_\_\_\_\_

Name of the School : \_\_\_\_\_

Question Numbers	1	2	3	4	5	Total Marks
Marks of Que.	8	8	8	8	8	40
Marks obtained						

Sup's Sign :- \_\_\_\_\_

Exam's Sign :- \_\_\_\_\_

Q. 1 (A) Choose the correct option.

(4)

(1) Which of the following flowers is used as a food ?

(a) Cauliflower (b) cabbage (c) lotus (d) sunflower

(2) Which of the following is not used in the making of a cot ?

(a) feather (b) thread (c) wood (d) iron

(3) What do we call the house which is made up of snow ?

(a) Apartment (b) Tent (c) Igloo (d) Hut

(4) Which of the following does not eat grass ?

(a) camel (b) goat (c) cow (d) cat

(B) Fill in the blanks

(4)

(1) Braille script is read by running the fingers on \_\_\_\_\_

(2) The name of my district is \_\_\_\_\_

(3) We can get post-card from \_\_\_\_\_

(4) In cricket there are \_\_\_\_\_ players on the field during the game.



Q. 2 (A) Write true or false for the following sentences.

(4)

- (1) Cloth and rope are used to make a tent. \_\_\_\_\_
- (2) Hide and seek is an individual game. \_\_\_\_\_
- (3) Children and elders are especially cared in the family. \_\_\_\_\_
- (4) Well is the main source of water. \_\_\_\_\_

(B) Identify my name and write who am I ?

(4)

- (1) I make pots \_\_\_\_\_
- (2) Cotton is obtained from my plant \_\_\_\_\_
- (3) I distribute letters \_\_\_\_\_
- (4) I'm a floating house in the water \_\_\_\_\_

Q. 3 (A) Classify the following items into plant products and animal products.

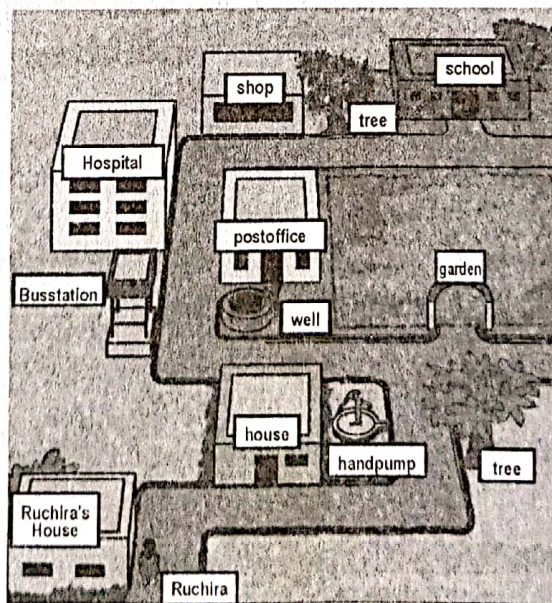
(4)

(Honey, Onion, Meat, Wheat, Milk, Maize, Potato, Eggs)

Plant products	Animal Products

(B) Answer the following questions by observing the following map.

(4)



(1) What lies near the right side of the Shop ?

\_\_\_\_\_

(2) What lies in front of the well ?

\_\_\_\_\_

(3) On which side of the house does Ruchira stand ?

\_\_\_\_\_

(4) What lies in front of the school ?

\_\_\_\_\_

Q. 4 (A) Do as directed.

(4)

(1) Name four objects used to make pot.

\_\_\_\_\_

(2) Name four animals you had seen.

\_\_\_\_\_

(B) Match the followings.

(4)

A	Ans	B
1. Mother's Mother	(1 - )	(A) Embroidery
2. Father's Sister	(2 - )	(B) Grandmother
3. Knitting on cloth	(3 - )	(C) set fo villages
4. Taluka	(4 - )	)D) Aunt

Q. 5 (A) Answer the following questions.

(4)

(1) How many games do you know which we play with a ball ?

\_\_\_\_\_

\_\_\_\_\_

(2) What things can you buy from a post-office ?


\_\_\_\_\_

\_\_\_\_\_



(B) Observe the picture and write four sentences in your own words.

(4)



---

---

---

---

---

---





# Municipal School Board, Ahmedabad

## Second Term Examination - 2020

Std.-3

Sub.-Maths

Date : 27-03-20

Time : 11-00 to 1-00

Total Marks - 40

Roll No. :- \_\_\_\_\_

Name of the Student : \_\_\_\_\_

Name of the School : \_\_\_\_\_

Section	A	B	C	D	Total Marks
Marks of Que.	12	18	6	4	40
Marks obtained					

Sup's Sign :- \_\_\_\_\_

Exam's Sign :- \_\_\_\_\_

### SECTION - A

Do as directed (Q-1 to 12 Each question has one mark)

(12)

\* Choose the correct option. (For Q-1 to 4)

(1) 6 times 8 = \_\_\_\_\_

- (A) 84 (B) 68 (C) 48 (D) 86

(2) Which of the following containers can fill than 1 litre liquid ?

- (A) bowl (B) bucket (C) tank (D) pot

(3) 

- (A)  (B)  (C)  (D) 

(4) Which add number is greater than 100 from the following ?

- (A) 100 (B) 99 (C) 113 (D) 108

\* Fill in the blanks. (Q-5 and 6)

(5) .....  $\div$  5 = 6

(6) Container used at your house can fill more than 1 litre water is \_\_\_\_\_

\* Answer the following question with the help of given table (Q. No 7 and 8)

Favourite Sweets	Jalebi	Barfi	Gulab Jamun	Laddoo
No. of Students	12	6	15	10

(7) Which is the most favourite sweet of students ? \_\_\_\_\_

(8) Which sweet students like less than laddoo ? \_\_\_\_\_

\* Match the following (Q. 9 to 12)

A

B

(9) Bucket

a) 15 litres

(10) Ear drop bottle

b) 2 litres

(11) Three bottles of 5 litres

c) 12 litres

(12) Three containers which can contain total of six litres

d) 555 litres

e) Less than half litre

### SECTION - B

Do as directed (Q-13 to 21 Each question carries 2 mark)

(18)

(13) Extend the number pattern.

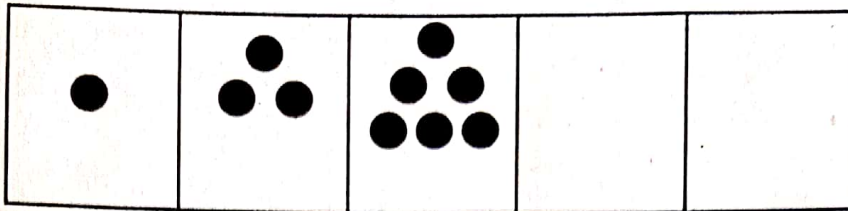
52, 57, 62, 67, \_\_\_\_\_, \_\_\_\_\_, \_\_\_\_\_, \_\_\_\_\_,

(14) Mahesh's shirts have 5 button, If there are 4 shirts then total how many buttons are there ?

(15) If we distributes 18 balloons among 3 girls than each girl will get how many balloons ?



(16) Extend the pattern.



(17) If a cat jumps 4 steps, how many jumps will it take from the beginning to reach on step 28 ?

(18) Prepare a chart from the given table (show each Absent Student with ☺)

Class	Absent Students
Class 1	3
Class 2	2
Class 3	1

Class	Absent Students (show Absent student with ☺)
Class 1	
Class 2	
Class 3	

(19) Compe the cash memo.

CASH MEMO RAM SHOP			
Item	Price	Rupees	Paisa
5 Pencils	2.50	-----	-----
6 Note books	-----	30	00
	Total	-----	-----

(20) Find out the secret message hidden inside it.

1 G 2 0 3 0 4 D 5 N 6 I 7 G 8 H 9 T

(21) Subtract it

$$\begin{array}{r} 108.50 \\ - 24.00 \\ \hline \end{array}$$



**SECTION - C**

Do as directed (Q-22 to 23 Each question has 3 mark)

(6)

(22) In a prayer the students are sitting in lines. There are 15 such lines. If there are 35 students in each line. How many students are there in the prayer Assembly ?

OR

(22) You have 18 dozen bananas. If you were to give three bananas to each child than how many more children could you give ?

(23) Varsha purchased things worth ₹ 72.50, Varsha gave ₹ 100 to the shop keeper, what amount the shop keeper will give back to Varsha ?

**SECTION - D**

(24) Classify the following :-

(4)

Things with weight more than 1 Kilogram and things with weight less than 1 Kilogram.

(Pencil, school bag, maths text book, T.V., table, duster, compass box, chocolate)

Things with weight more than 1 kilogram	Things with weight less than 1 kilogram

OR

(24) Guess their weights with the help of given options and write.

(1000 k.g, 20 k.g, Less than 1 k.g, 3 k.g, 400 k.g, 50 k.g.)

Cow :- \_\_\_\_\_

Apple :- \_\_\_\_\_

Water melon :- \_\_\_\_\_

Your weight :- \_\_\_\_\_

SECTION - B

Things with weight less than 1 kg	Things with weight more than 1 kg





નગર પ્રાથમિક શિક્ષણ સમિતિ, અમદાવાદ

દ્વિતીય સત્રાંત પરીક્ષા : ૨૦૨૦

ધોરણ-૩

વિષય - પ્રાદેશિક ભાષા

તારીખ :- ૩૦-૩-૨૦

સમય :- ૧૧-૦૦ થી ૧-૦૦

કુલ ગુણ - ૪૦

રજિ. નંબર :- \_\_\_\_\_

વર્ગ :- \_\_\_\_\_

વિદ્યાર્થીનું નામ :- \_\_\_\_\_

શાળાનું નામ :- \_\_\_\_\_

પ્રશ્ન ક્રમાંક	૧	૨	૩	૪	૫	કુલ ગુણ
પ્રશ્નના ગુણ	૮	૮	૮	૮	૮	૪૦
મેળવેલ ગુણ						

નિરીક્ષકની સહી :- \_\_\_\_\_

પરીક્ષકની સહી :- \_\_\_\_\_

પ્રશ્ન : ૧ (ક) 'ળ' ફરતે ○ કરો.

(૪)

ઝ	ઘ	ઘ	ળ	હ
ઘ	હ	ધ	ળ	ધ
હ	ળ	ક	ધ	ગ
ત	ઝ	હ	પ	લ
હ	લ	ઝ	હ	ળ

(ખ) જોડકાં જોડો.

(૪)

(૧)

(અ)

(૨)

(બ)

(૩)

(ક)

(૪)

(ડ)

ઉત્તર (૧) \_\_\_\_\_ (૨) \_\_\_\_\_ (૩) \_\_\_\_\_ (૪) \_\_\_\_\_



પ્રશ્ન : ૨ (ક) શબ્દો જોઈને ફરીથી લખો.

- (૧) પૂંછડી - \_\_\_\_\_  
(૨) શિંગડાં - \_\_\_\_\_  
(૩) મેદાન - \_\_\_\_\_  
(૪) વાછરડું - \_\_\_\_\_

(૪)

(ખ) પેટીમાં કયો અક્ષર આવશે તે લખો.

(ખો, વા, મીં, રું)

	દ	રું
--	---	-----

લ		રું
---	--	-----

વ	છે	
---	----	--

	લ	રું
--	---	-----

(૪)

પ્રશ્ન : ૩ (ક) નીચે આપેલા શબ્દોને ઉદાહરણ પ્રમાણે લખો.

ઉદાહરણ : કૂદ - કૂદાકૂદ

- (૧) ખેંચ - \_\_\_\_\_  
(૨) ભૂમ - \_\_\_\_\_  
(૩) હૂપ - \_\_\_\_\_  
(૪) ચીસ - \_\_\_\_\_

(૪)

(ખ) ઉદાહરણ પ્રમાણે વાક્ય બનાવો.

ઉદા.	ખાતી	વાંદરાં	હતી.	ફળ
વાંદરાં ફળ ખાતી હતી.				

(૧)	ડોક	વાંકી	હતી.	ઊંટની

(૪)

(૨)	હત્તા.	લાંબા	પગ	કરણના

(૩)	મોરનાં	પીંછાં	રંગીન	હતાં.

(૪)	કાન	સસલાના	હતા.	લાંબા

પ્રશ્ન : ૪ (ક) નીચે આપેલા પ્રશ્નોના જવાબ એક શબ્દમાં લખો. (ગમે તે ચાર)

(૪)

(૧) ભેંસનાં શિંગડાં કેવાં છે ?



---



---

(૨) ચકલી કોના જેવી હોય છે ?

---



---

(૩) વાછરડાંની મા કોણ છે ?

---



---

(૪) નાના વાંદરાને તળાવના પાણીમાં શું દેખાતું હતું ?

---



---

(૫) મીના દાદીમાને ક્યાં લઈ જાય છે ?

---



---

(ખ) સમાન ઉચ્ચારવાળા શબ્દો શોધીને લખો.

(ચપ્પુ, વાડ, હરતા, મંગલ)

(૪)

(૧) જંગલ - \_\_\_\_\_

(૨) ઝાડ - \_\_\_\_\_

(૩) ગપ્પુ - \_\_\_\_\_

(૪) ફરતા - \_\_\_\_\_

પ્રશ્ન : ૫ (ક) નીચે આપેલાં વાક્યો સારા અક્ષરે લખો.

(૪)

(૧) હું વાછરું છું.

\_\_\_\_\_

(૨) બગીચામાં ઝાડ છે.

\_\_\_\_\_

(૩) મને ભણવું ગમે છે.

\_\_\_\_\_

(૪) વરસાદ વરસે છે.

\_\_\_\_\_

(ખ) નીચે આપેલાં ચિત્ર જોઈને નામ લખો.

(૪)

(૧)



\_\_\_\_\_

(૨)



\_\_\_\_\_

(૩)



\_\_\_\_\_

(૪)



\_\_\_\_\_